



PARTS OF ANGLES

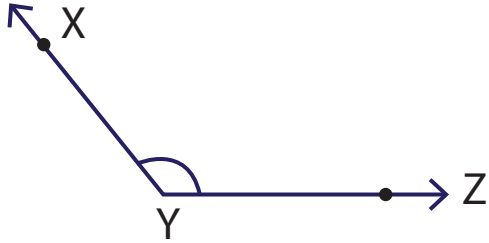
Name _____

Score _____

AN:05

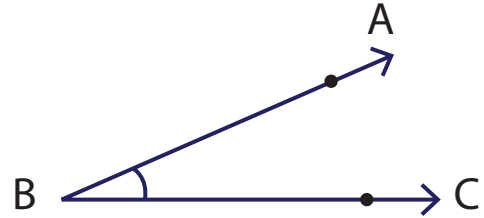
Write the letter/s used to represent the vertex and arms of the angles shown below.

1)



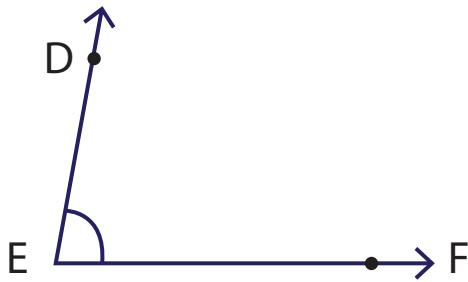
Vertex _____ Arms _____

2)




Vertex _____ Arms _____

3)



Vertex _____ Arms _____

4)



Vertex _____ Arms _____

Draw an angle using the information given below. (Figures may vary)

1) Vertex : B
Arms : BC, BD

2) Vertex : F
Arms : FG, FH, FI



PARTS OF ANGLES

Name _____

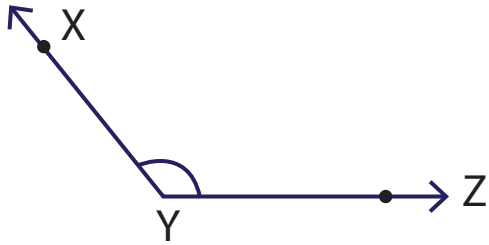
Score _____

Answer key

AN:05

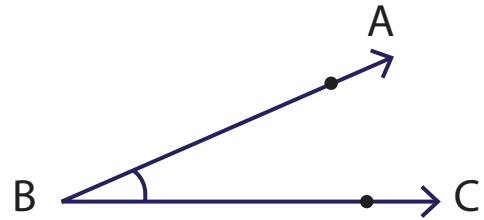
Write the letter/s used to represent the vertex and arms of the angles shown below.

1)



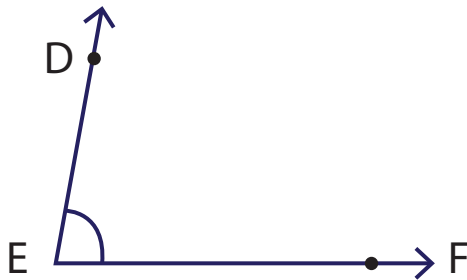
Vertex Y Arms XY, YZ

2)




Vertex A Arms AB, AC

3)



Vertex E Arms DE, EF

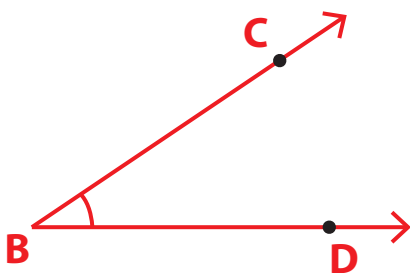
4)



Vertex K Arms JK, KL

Draw an angle using the information given below. (Figures may vary)

1) Vertex : B
Arms : BC, BD



2) Vertex : F
Arms : FG, FH, FI

