



Area - Real Life Objects

Name _____

Score _____

AC:20

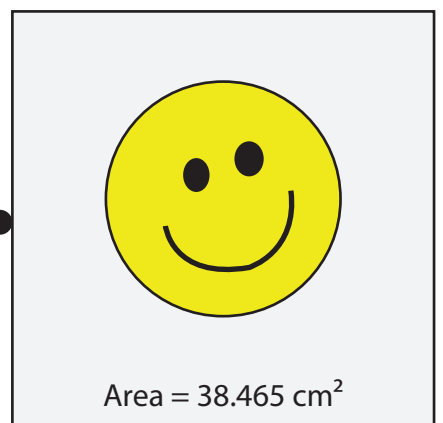
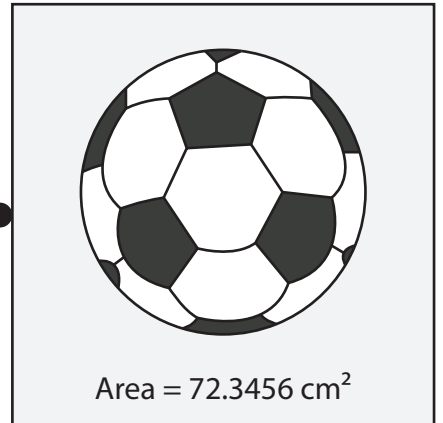
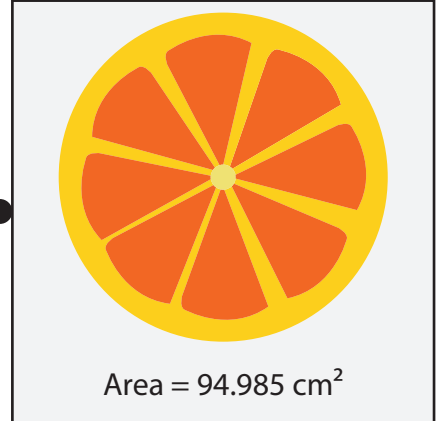
Find the area of each circle shaped objects and match the following. (Use $\pi = \frac{22}{7}$ or 3.14)

1) Radius = 4.8 cm ●

2) Diameter = 11 cm ●

3) Radius = 3.5 cm ●

4) Diameter = 6 cm ●





Area - Real Life Objects

Name _____

Score _____

Answer key

AC:20

Find the area of each circle shaped objects and match the following. (Use $\pi = \frac{22}{7}$ or 3.14)

1)

Radius = 4.8 cm

2)

Diameter = 11 cm

3)

Radius = 3.5 cm

4)

Diameter = 6 cm



Area = 94.985 cm²



Area = 72.3456 cm²



Area = 28.26 cm²



Area = 38.465 cm²