



Area - Real Life Objects

Name _____

Score _____

AC:19

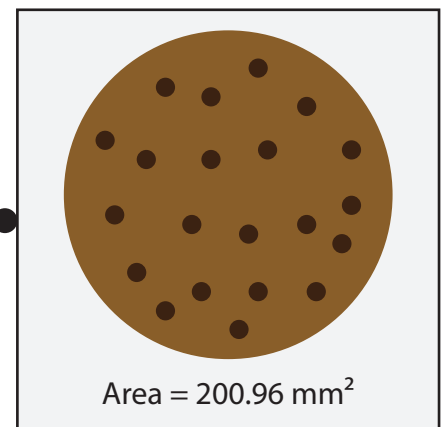
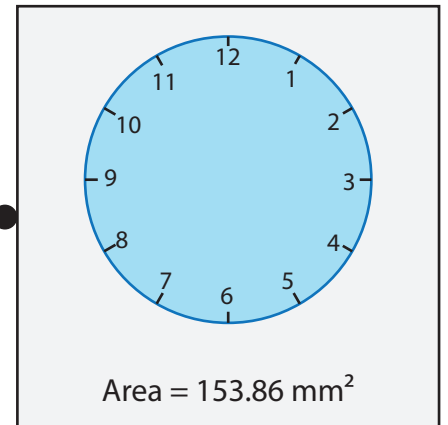
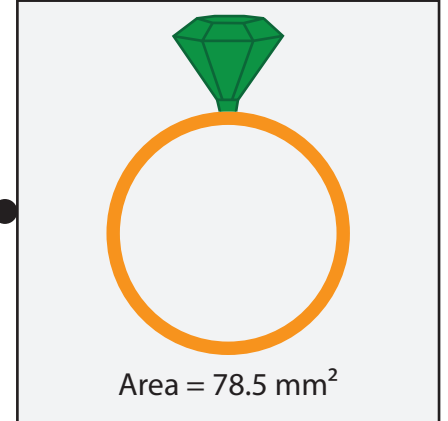
Find the area of each circle shaped objects and match the following. (Use $\pi = \frac{22}{7}$ or 3.14)

1) Diameter = 16 mm ●

2) Radius = 5 mm ●

3) Diameter = 8 mm ●

4) Radius = 7 mm ●





Area - Real Life Objects

Name _____

Score _____

Answer key

AC:19

Find the area of each circle shaped objects and match the following. (Use $\pi = \frac{22}{7}$ or 3.14)

1)

Diameter = 16 mm

2)

Radius = 5 mm

3)

Diameter = 8 mm

4)

Radius = 7 mm

