



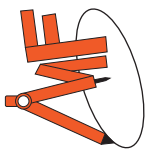
GRADE 1

PLACE VALUE

WORKBOOK 2




1	6
tens	ones




PLACE VALUE - CHART

Date _____



TENS



ONES



PLACE VALUE

Date _____

Count and write the correct number of tens and ones in the blanks.

_____ tens and _____ ones

_____ tens and _____ ones

_____ tens and _____ ones

_____ tens and _____ ones

_____ tens and _____ ones

_____ tens and _____ ones

_____ tens and _____ ones

_____ tens and _____ ones



PLACE VALUE

Date _____

Count and write the correct number of tens and ones in the blanks.

_____ tens and _____ ones

_____ tens and _____ ones

_____ tens and _____ ones

_____ tens and _____ ones

_____ tens and _____ ones

_____ tens and _____ ones

_____ tens and _____ ones

_____ tens and _____ ones



PLACE VALUE

Date _____

Draw any picture of your choice to represent the tens and ones.

2 tens and 4 ones

1 tens and 1 ones

2 tens and 6 ones

3 tens and 0 ones

1 tens and 3 ones

2 tens and 8 ones

3 tens and 2 ones

1 tens and 5 ones



PLACE VALUE

Date _____

Draw any picture of your choice to represent the tens and ones.

2 tens and 1 ones

2 tens and 9 ones

1 tens and 4 ones

2 tens and 7 ones

1 tens and 8 ones

3 tens and 3 ones

2 tens and 0 ones

1 tens and 2 ones



PLACE VALUE

Date _____

Write down the number of tens and ones in each number.

1) 48 = _____

2) 61 = _____

3) 17 = _____

4) 89 = _____

5) 34 = _____

6) 72 = _____

7) 50 = _____

8) 25 = _____

9) 96 = _____

10) 63 = _____



PLACE VALUE

Date _____

Write down the number of tens and ones in each number.

1) 26 = _____

2) 54 = _____

3) 78 = _____

4) 43 = _____

5) 97 = _____

6) 39 = _____

7) 11 = _____

8) 80 = _____

9) 62 = _____

10) 35 = _____



PLACE VALUE

Date _____

Write the number for the expanded notation.

1) 6 tens and 4 ones = _____

2) 3 tens and 9 ones = _____

3) 8 tens and 2 ones = _____

4) 1 tens and 7 ones = _____

5) 7 tens and 3 ones = _____

6) 5 tens and 1 ones = _____

7) 4 tens and 9 ones = _____

8) 9 tens and 5 ones = _____

9) 2 tens and 3 ones = _____

10) 9 tens and 6 ones = _____

11) 7 tens and 8 ones = _____

12) 4 tens and 0 ones = _____



PLACE VALUE

Date _____

Write the number for the expanded notation.

1) 8 tens and 3 ones = _____

2) 9 tens and 0 ones = _____

3) 4 tens and 6 ones = _____

4) 7 tens and 1 ones = _____

5) 6 tens and 0 ones = _____

6) 2 tens and 7 ones = _____

7) 3 tens and 4 ones = _____

8) 1 tens and 2 ones = _____

9) 8 tens and 5 ones = _____

10) 5 tens and 8 ones = _____

11) 3 tens and 5 ones = _____

12) 1 tens and 9 ones = _____

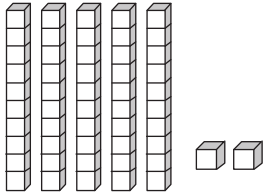


PLACE VALUE

Date _____

Write down the number of tens and ones using the blocks.

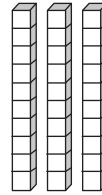
1)



Tens

Ones

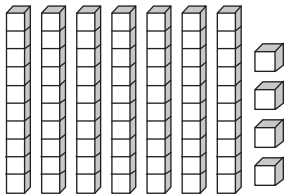
2)



Tens

Ones

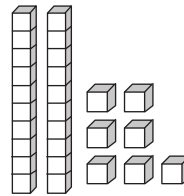
3)



Tens

Ones

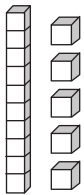
4)



Tens

Ones

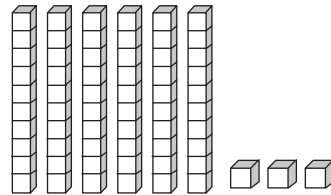
5)



Tens

Ones

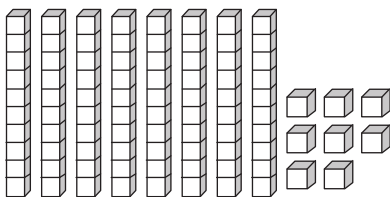
6)



Tens

Ones

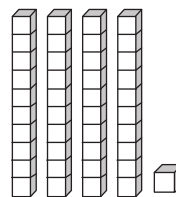
7)



Tens

Ones

8)



Tens

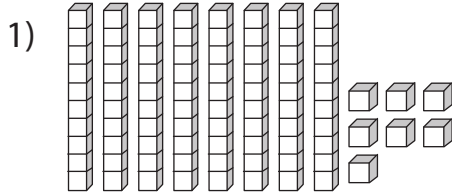
Ones



PLACE VALUE

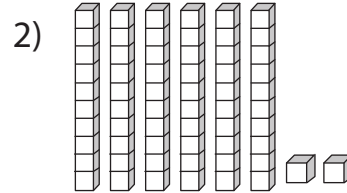
Date _____

Write down the number of tens and ones using the blocks.



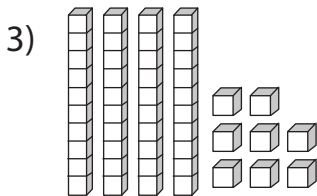
Tens

Ones



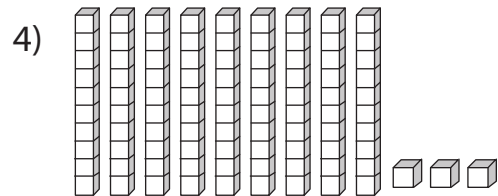
Tens

Ones



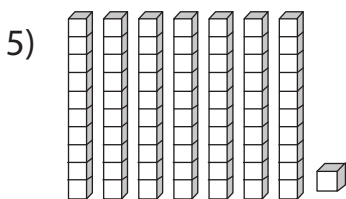
Tens

Ones



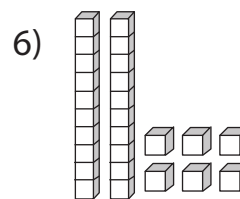
Tens

Ones



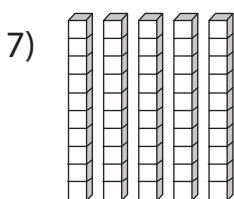
Tens

Ones



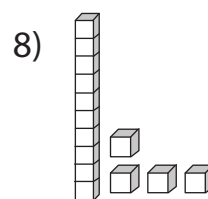
Tens

Ones



Tens

Ones



Tens

Ones



PLACE VALUE

Date _____

Write the place value of the following numbers.

1) 1 9

2) 3 7

3) 9 3

4) 5 1

5) 8 6

6) 2 5

7) 7 8

8) 4 0

9) 8 2

10) 6 4



PLACE VALUE

Date _____

Write the place value of the following numbers.

1) 4 8

2) 9 4

3) 6 0

4) 8 3

5) 3 5

6) 7 1

7) 9 6

8) 1 2

9) 5 7

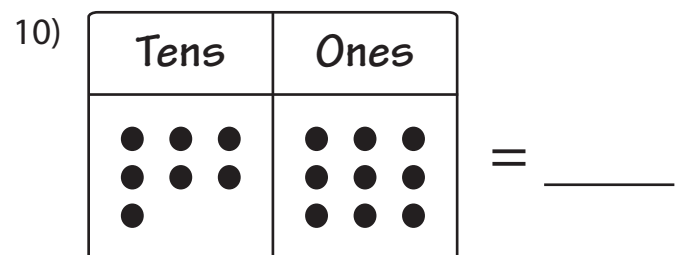
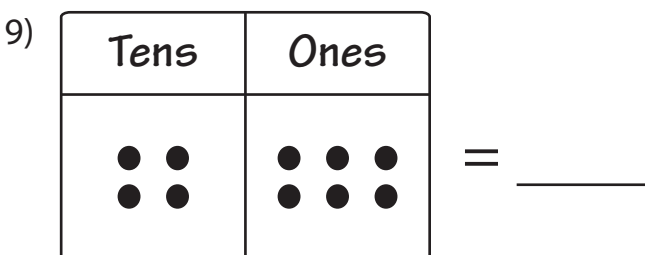
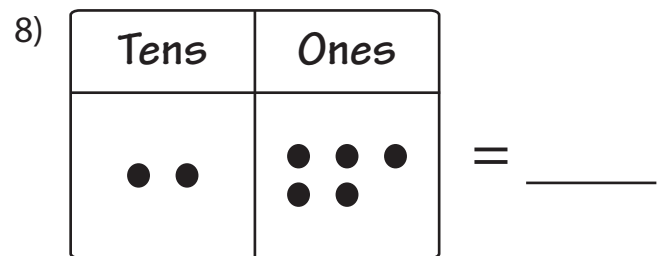
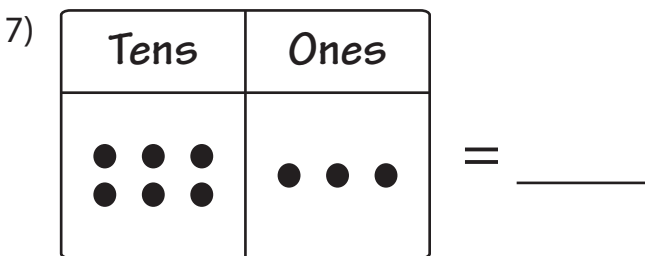
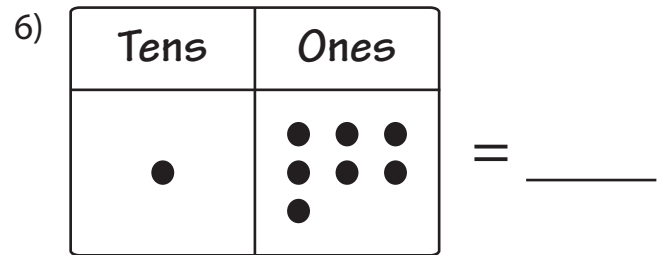
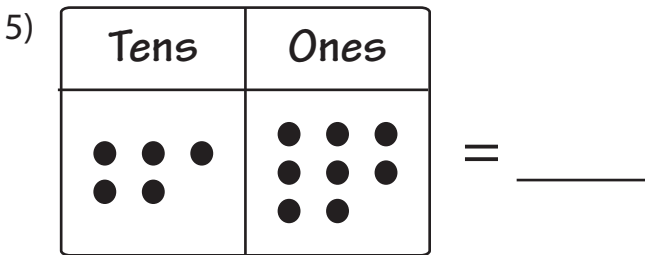
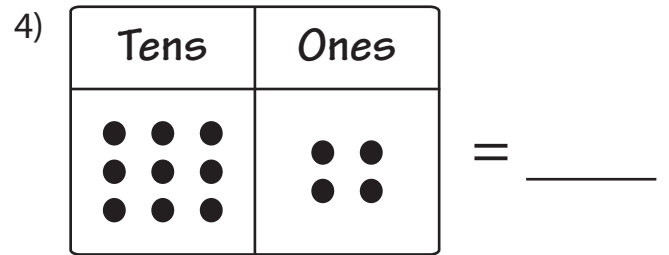
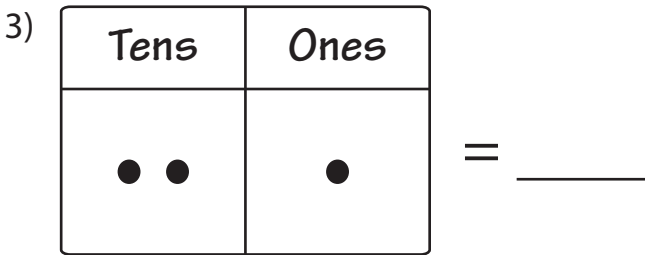
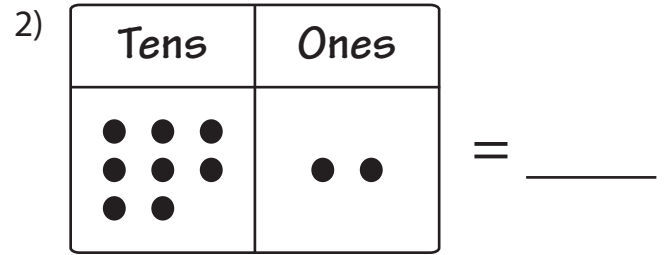
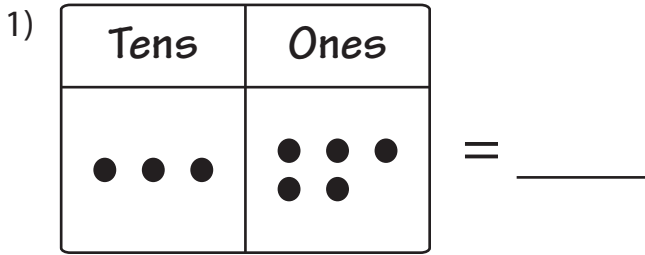
10) 2 9



PLACE VALUE

Date _____

Count the dots in each place value to write the numeral.





PLACE VALUE

Date _____

Count the dots in each place value to write the numeral.

1)

Tens	Ones

 = _____

2)

Tens	Ones

 = _____

3)

Tens	Ones

 = _____

4)

Tens	Ones

 = _____

5)

Tens	Ones

 = _____

6)

Tens	Ones

 = _____

7)

Tens	Ones

 = _____

8)

Tens	Ones

 = _____

9)

Tens	Ones

 = _____

10)

Tens	Ones

 = _____



PLACE VALUE

Date _____

Write the missing numbers.

1) 6 tens and _____ ones = 62

2) 2 tens and 7 ones = _____

3) _____ tens and 5 ones = 75

4) 5 tens and _____ ones = 53

5) 3 tens and 0 ones = _____

6) _____ tens and 4 ones = 84

7) 1 tens and _____ ones = 18

8) 4 tens and 1 ones = _____



PLACE VALUE

Date _____

Write the missing numbers.

1) _____ tens and 4 ones = 14

2) 5 tens and _____ ones = 56

3) 8 tens and 2 ones = _____

4) _____ tens and 7 ones = 37

5) 9 tens and _____ ones = 93

6) 6 tens and 1 ones = _____

7) _____ tens and 5 ones = 45

8) 2 tens and _____ ones = 28



MATCHING

Date _____

Match the following.

1) 49 • • 7 ones

2) 67 • • 3 tens

3) 15 • • 6 ones

4) 31 • • 4 tens

5) 76 • • 2 ones

6) 53 • • 2 tens

7) 24 • • 3 ones

8) 82 • • 1 tens



MATCHING

Date _____

Match the following.

- | | | | | |
|----|-----|---|---|--------|
| 1) | 2 8 | • | • | 8 tens |
| 2) | 8 4 | • | • | 3 ones |
| 3) | 5 2 | • | • | 9 tens |
| 4) | 9 6 | • | • | 1 ones |
| 5) | 4 3 | • | • | 5 tens |
| 6) | 7 7 | • | • | 8 ones |
| 7) | 1 1 | • | • | 3 tens |
| 8) | 3 5 | • | • | 7 ones |