


GRADE 2

NUMBERS & SKIP COUNTING

WORKBOOK 2



10	20	
	30	
50	40	
60		
70		
80	90	100

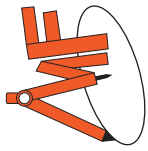




Date _____

Number Chart - 10 to 1000

10	20	30	40	50	60	70	80	90	100
110	120	130	140	150	160	170	180	190	200
210	220	230	240	250	260	270	280	290	300
310	320	330	340	350	360	370	380	390	400
410	420	430	440	450	460	470	480	490	500
510	520	530	540	550	560	570	580	590	600
610	620	630	640	650	660	670	680	690	700
710	720	730	740	750	760	770	780	790	800
810	820	830	840	850	860	870	880	890	900
910	920	930	940	950	960	970	980	990	1000



Date: _____



SKIP COUNTING

5

5 10 15 20 25

30 35 40 45 50



Skip Counting by 5


Date _____

Fill in the missing numbers.

1)




2)



3)



4)



5)



6)



7)





Skip Counting by 5

Date _____

Fill in the missing numbers.

1)

60	65					
----	----	--	--	--	--	--

2)

35	40					
----	----	--	--	--	--	--

3)

5	10					
---	----	--	--	--	--	--

4)

20	25					
----	----	--	--	--	--	--

5)

85	90					
----	----	--	--	--	--	--

6)

50	55					
----	----	--	--	--	--	--

7)



90	95					
----	----	--	--	--	--	--



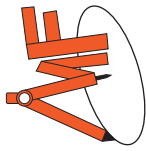
Skip Counting by 5

Date _____


Skip count by 5 and color the numbers in green.



1	2	3	4	5	6	7	8	9	10
11	12	13	14	15	16	17	18	19	20
21	22	23	24	25	26	27	28	29	30
31	32	33	34	35	36	37	38	39	40
41	42	43	44	45	46	47	48	49	50
51	52	53	54	55	56	57	58	59	60
61	62	63	64	65	66	67	68	69	70
71	72	73	74	75	76	77	78	79	80
81	82	83	84	85	86	87	88	89	90
91	92	93	94	95	96	97	98	99	100



Date: _____



SKIP COUNTING

10

10 20 30 40 50

60 70 80 90 100



Skip Counting by 10


Date _____

Fill in the missing numbers.

1)




2)




3)



4)



5)



6)



7)





Skip Counting by 10

Date _____

Fill in the missing numbers.

1)

20	30					
----	----	--	--	--	--	--

2)

60	70					
----	----	--	--	--	--	--

3)

100	110					
-----	-----	--	--	--	--	--

4)

140	150					
-----	-----	--	--	--	--	--

5)

50	60					
----	----	--	--	--	--	--

6)

150	160					
-----	-----	--	--	--	--	--

7)

70	80					
----	----	--	--	--	--	--



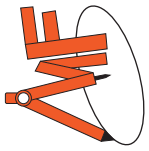
Skip Counting by 10

Date _____


Skip count by 10 and color the numbers in purple.



1	2	3	4	5	6	7	8	9	10
11	12	13	14	15	16	17	18	19	20
21	22	23	24	25	26	27	28	29	30
31	32	33	34	35	36	37	38	39	40
41	42	43	44	45	46	47	48	49	50
51	52	53	54	55	56	57	58	59	60
61	62	63	64	65	66	67	68	69	70
71	72	73	74	75	76	77	78	79	80
81	82	83	84	85	86	87	88	89	90
91	92	93	94	95	96	97	98	99	100



Date: _____



SKIP COUNTING

100

100 200 300 400 500

600 700 800 900 1000



Skip Counting by 100

Date _____

Fill in the missing numbers.

1)

130	230					
-----	-----	--	--	--	--	--

2)

50	150					
----	-----	--	--	--	--	--

3)

10	110					
----	-----	--	--	--	--	--

4)

70	170					
----	-----	--	--	--	--	--

5)

90	190					
----	-----	--	--	--	--	--

6)

20	120					
----	-----	--	--	--	--	--

7)

100	200					
-----	-----	--	--	--	--	--



PLACE VALUE : DECIMALS

Date _____

1) What is the place value of 3 in the following questions?

15.3 _____

7.63 _____

3.21 _____

6.32 _____

2) Write the value of 6 in 2.26 in standard form and word form.

Standard form =

Word form =

3) Write the value of 4 in 40.1 in standard form and word form.

Standard form =

Word form =

4) Write the value of 8 in 3.89 in standard form and word form.

Standard form =

Word form =

5) 4 Tens + 5 Ones + 7 Tenths =

6) 9 Ones + 2 Tenths + 3 Hundredths =



PLACE VALUE : DECIMALS

Date _____

1) What is the place value of 2 in the following questions?

26.41 _____

5.277 _____

8.026 _____

1.452 _____

2) Write the value of 5 in 6.005 in standard form and word form.

Standard form =

Word form =

3) Write the value of 4 in 43.22 in standard form and word form.

Standard form =

Word form =

4) Write the value of 8 in 1.287 in standard form and word form.

Standard form =

Word form =

5) 2 Ones + 2 Tenths + 4 Hundredths + 6 Thousandths =

6) 6 Hundreds + 1 Tens + 9 Ones + 2 Tenths =



PLACE VALUE : DECIMALS

Date _____

1) Circle the numbers that have 3 thousandths.

5.1234

65.732

10.783

301.67

43.809

2) Circle the numbers that have 6 tenths.

61.789

4.6541

52.677

728.62

5.2106

3) Circle the numbers that have 9 tens.

92.453

90.782

7.8902

659.31

4.0093

4) Write the place value of each digit in words.

10.413 _____

619.45 _____

4,230.4 _____

70.123 _____

5) Write the numbers in expanded form.

5.6702 = _____

238.14 = _____

87.524 = _____



PLACE VALUE : DECIMALS

Date _____

1) Circle the numbers that have 4 ten thousandths.

23.6614 341.173 6.82134 9,914.27 72.2354

2) Circle the numbers that have 7 hundredths.

70.2412 91.2741 101.673 4.23467 232.017

3) Circle the numbers that have 1 hundred thousandths.

4.56721 12.3678 678.932 7.09451 1,289.41

4) Write the place value of each digit in words.

231.562 _____

4,439.08 _____

7.87221 _____

62.0976 _____

5) Write the numbers in expanded form.

12.8927 = _____

567.009 = _____

9,123.68 = _____