



GRADE 1

ADDITION & SUBTRACTION

WORKBOOK 1

Addition by Skip Counting

Making Ten Addition

Decompose numbers to ten

*Relationship Between
Addition & Subtraction*





Skip Counting by 2


Date _____

Fill in the missing numbers.

1)




2)



3)



4)




5)



6)



7)





Skip Counting by 3

Date _____

Skip count by 3 and color the numbers in yellow.



1	2	3	4	5	6	7	8	9	10
11	12	13	14	15	16	17	18	19	20
21	22	23	24	25	26	27	28	29	30
31	32	33	34	35	36	37	38	39	40
41	42	43	44	45	46	47	48	49	50
51	52	53	54	55	56	57	58	59	60
61	62	63	64	65	66	67	68	69	70
71	72	73	74	75	76	77	78	79	80
81	82	83	84	85	86	87	88	89	90
91	92	93	94	95	96	97	98	99	100



Skip Counting by 4

Date _____

Fill in the missing numbers.

1)

20	24					
----	----	--	--	--	--	--

2)

36	40					
----	----	--	--	--	--	--

3)

64	68					
----	----	--	--	--	--	--

4)

8	12					
---	----	--	--	--	--	--

5)

16	20					
----	----	--	--	--	--	--

6)

72	76					
----	----	--	--	--	--	--

7)

40	44					
----	----	--	--	--	--	--



Skip Counting by 5


Date _____

Fill in the missing numbers.

1)




2)




3)



4)




5)



6)



7)





Skip Counting by 6

Date _____

Fill in the missing numbers.

1)

18	24					
----	----	--	--	--	--	--

2)

36	42					
----	----	--	--	--	--	--

3)

96	102					
----	-----	--	--	--	--	--

4)

78	84					
----	----	--	--	--	--	--

5)

54	60					
----	----	--	--	--	--	--

6)

66	72					
----	----	--	--	--	--	--

7)

30	36					
----	----	--	--	--	--	--



Skip Counting by 7

Date _____

Fill in the missing numbers.

1)

35	42					
----	----	--	--	--	--	--

2)

49	56					
----	----	--	--	--	--	--

3)

7	14					
---	----	--	--	--	--	--

4)

91	98					
----	----	--	--	--	--	--

5)

126	133					
-----	-----	--	--	--	--	--

6)

21	28					
----	----	--	--	--	--	--

7)

105	112					
-----	-----	--	--	--	--	--



Skip Counting by 8

Date _____

Skip count by 8 and color the numbers in brown.



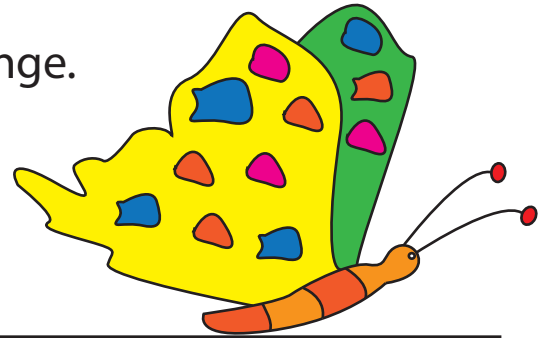

1	2	3	4	5	6	7	8	9	10
11	12	13	14	15	16	17	18	19	20
21	22	23	24	25	26	27	28	29	30
31	32	33	34	35	36	37	38	39	40
41	42	43	44	45	46	47	48	49	50
51	52	53	54	55	56	57	58	59	60
61	62	63	64	65	66	67	68	69	70
71	72	73	74	75	76	77	78	79	80
81	82	83	84	85	86	87	88	89	90
91	92	93	94	95	96	97	98	99	100



Skip Counting by 9

Date _____

Skip count by 9 and color the numbers in orange.



1	2	3	4	5	6	7	8	9	10
11	12	13	14	15	16	17	18	19	20
21	22	23	24	25	26	27	28	29	30
31	32	33	34	35	36	37	38	39	40
41	42	43	44	45	46	47	48	49	50
51	52	53	54	55	56	57	58	59	60
61	62	63	64	65	66	67	68	69	70
71	72	73	74	75	76	77	78	79	80
81	82	83	84	85	86	87	88	89	90
91	92	93	94	95	96	97	98	99	100



Skip Counting by 10


Date _____

Fill in the missing numbers.

1)




2)




3)



4)



5)



6)



7)





MAKING TEN

Date _____

1) $4 + \boxed{6} = 10$

2) $\boxed{} + 3 = 10$

3) $\boxed{} + 7 = 10$

4) $5 + \boxed{} = 10$

5) $1 + \boxed{} = 10$

6) $\boxed{} + 2 = 10$

1) $3 + 9 = \boxed{12}$

 $\underline{10} + \underline{2} = \underline{12}$

2) $7 + 6 = \boxed{}$

 $\underline{} + \underline{} = \underline{}$

3) $9 + 5 = \boxed{}$

 $\underline{} + \underline{} = \underline{}$

4) $8 + 7 = \boxed{}$

 $\underline{} + \underline{} = \underline{}$

5) $4 + 9 = \boxed{}$

 $\underline{} + \underline{} = \underline{}$

6) $5 + 6 = \boxed{}$

 $\underline{} + \underline{} = \underline{}$



MAKING TEN

Date _____

1) $2 + \square = 10$

2) $9 + \square = 10$

3) $\square + 5 = 10$

4) $\square + 6 = 10$

5) $1 + \square = 10$

6) $\square + 4 = 10$

1) $4 + 8 = \square$

_____ + _____ = _____

2) $3 + 8 = \square$

_____ + _____ = _____

3) $9 + 2 = \square$

_____ + _____ = _____

4) $6 + 7 = \square$

_____ + _____ = _____

5) $9 + 9 = \square$

_____ + _____ = _____

6) $7 + 8 = \square$

_____ + _____ = _____



MAKING TEN

Date _____

1) $9 + \square = 10$

2) $6 + \square = 10$

3) $\square + 0 = 10$

4) $1 + \square = 10$

5) $4 + \square = 10$

6) $\square + 5 = 10$

1) $8 + 8 = \square$

_____ + _____ = _____

2) $7 + 9 = \square$

_____ + _____ = _____

3) $6 + 5 = \square$

_____ + _____ = _____

4) $5 + 8 = \square$

_____ + _____ = _____

5) $9 + 6 = \square$

_____ + _____ = _____

6) $4 + 9 = \square$

_____ + _____ = _____



MAKING TEN SUBTRACTION

Date _____

1) $12 - 3 = \boxed{9}$

$\begin{array}{c} 3 \\ / \quad \backslash \\ \textcircled{2} \quad \textcircled{1} \end{array}$

$\underline{10} - \underline{1} = \underline{9}$

2) $17 - 9 = \boxed{}$

$\begin{array}{c} 9 \\ / \quad \backslash \\ \textcirc{} \quad \textcirc{} \end{array}$

$\underline{} - \underline{} = \underline{}$

3) $15 - 8 = \boxed{}$

$\begin{array}{c} 8 \\ / \quad \backslash \\ \textcirc{} \quad \textcirc{} \end{array}$

$\underline{} - \underline{} = \underline{}$

4) $11 - 2 = \boxed{}$

$\begin{array}{c} 2 \\ / \quad \backslash \\ \textcirc{} \quad \textcirc{} \end{array}$

$\underline{} - \underline{} = \underline{}$

5) $13 - 4 = \boxed{}$

$\begin{array}{c} 4 \\ / \quad \backslash \\ \textcirc{} \quad \textcirc{} \end{array}$

$\underline{} - \underline{} = \underline{}$

6) $16 - 7 = \boxed{}$

$\begin{array}{c} 7 \\ / \quad \backslash \\ \textcirc{} \quad \textcirc{} \end{array}$

$\underline{} - \underline{} = \underline{}$

7) $14 - 6 = \boxed{}$

$\begin{array}{c} 6 \\ / \quad \backslash \\ \textcirc{} \quad \textcirc{} \end{array}$

$\underline{} - \underline{} = \underline{}$

8) $18 - 9 = \boxed{}$

$\begin{array}{c} 9 \\ / \quad \backslash \\ \textcirc{} \quad \textcirc{} \end{array}$

$\underline{} - \underline{} = \underline{}$



MAKING TEN SUBTRACTION

Date _____

1) $16 - 6 = \square$

____ - ____ = ____

2) $18 - 7 = \square$

____ - ____ = ____

3) $14 - 3 = \square$

____ - ____ = ____

4) $15 - 8 = \square$

____ - ____ = ____

5) $12 - 5 = \square$

____ - ____ = ____

6) $17 - 9 = \square$

____ - ____ = ____

7) $11 - 4 = \square$

____ - ____ = ____

8) $13 - 7 = \square$

____ - ____ = ____



MAKING TEN SUBTRACTION

Date _____

1) $14 - 6 = \square$

____ - ____ = ____

2) $19 - 8 = \square$

____ - ____ = ____

3) $11 - 3 = \square$

____ - ____ = ____

4) $15 - 5 = \square$

____ - ____ = ____

5) $13 - 6 = \square$

____ - ____ = ____

6) $16 - 9 = \square$

____ - ____ = ____

7) $17 - 8 = \square$

____ - ____ = ____

8) $11 - 7 = \square$

____ - ____ = ____



ADDITION / SUBTRACTION RELATIONSHIP

Date _____

$1) \quad 6 + 9 = \boxed{15}$

$2) \quad 7 + 4 = \boxed{}$

$15 - 6 = \boxed{9}$

$11 - 7 = \boxed{}$

$3) \quad 2 + 8 = \boxed{}$

$4) \quad 5 + 5 = \boxed{}$

$10 - 2 = \boxed{}$

$10 - 5 = \boxed{}$

$5) \quad 8 + 6 = \boxed{}$

$6) \quad 3 + 7 = \boxed{}$

$14 - 6 = \boxed{}$

$10 - 3 = \boxed{}$

Add or subtract using the three numbers.

$1) \quad \boxed{5 \quad 16 \quad 11}$

$2) \quad \boxed{11 \quad 8 \quad 3}$

$5 + 11 = 16$

$11 + 5 = 16$

$16 - 5 = 11$

$16 - 11 = 5$



ADDITION / SUBTRACTION RELATIONSHIP

Date _____

1) $4 + 9 = \square$

$13 - 4 = \square$

3) $6 + 8 = \square$

$14 - 6 = \square$

5) $9 + 9 = \square$

$18 - 9 = \square$

2) $2 + 8 = \square$

$10 - 8 = \square$

4) $1 + 7 = \square$

$8 - 7 = \square$

6) $4 + 3 = \square$

$7 - 3 = \square$

Add or subtract using the three numbers.

1) $\boxed{8 \quad 9 \quad 17}$

2) $\boxed{4 \quad 7 \quad 11}$



ADDITION / SUBTRACTION RELATIONSHIP

Date _____

1) $1 + 7 = \square$

2) $6 + 9 = \square$

$8 - 1 = \square$

$15 - 6 = \square$

3) $2 + 4 = \square$

4) $8 + 5 = \square$

$6 - 4 = \square$

$13 - 5 = \square$

5) $7 + 7 = \square$

6) $3 + 6 = \square$

$14 - 7 = \square$

$9 - 3 = \square$

Add or subtract using the three numbers.

1) $\boxed{5 \quad 15 \quad 10}$

2) $\boxed{3 \quad 12 \quad 15}$
