



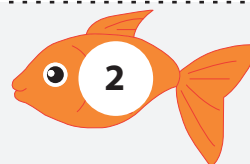
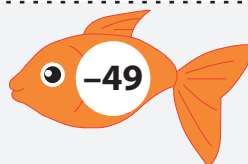




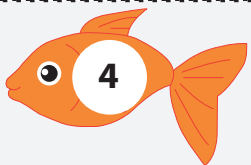
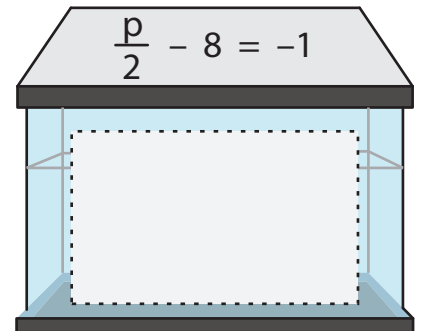
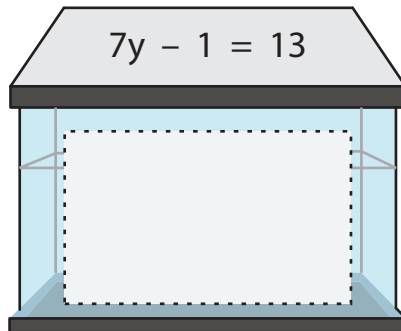
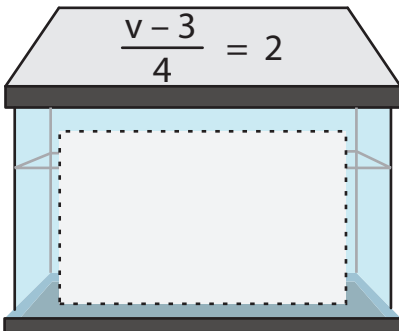
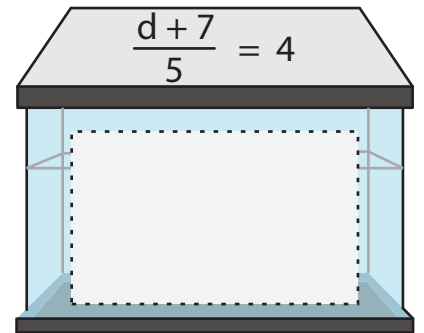
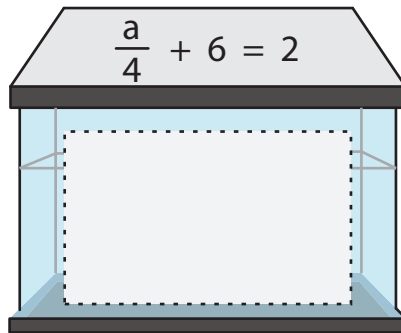
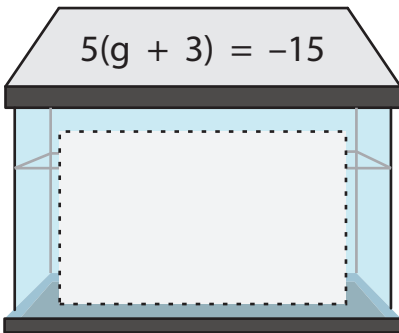
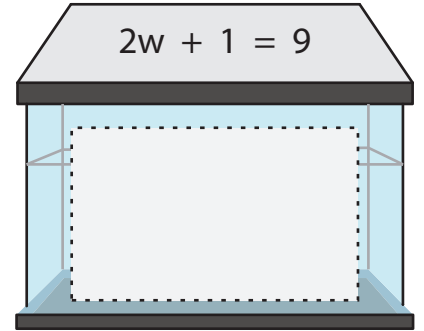
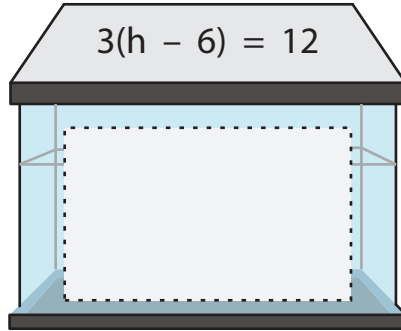
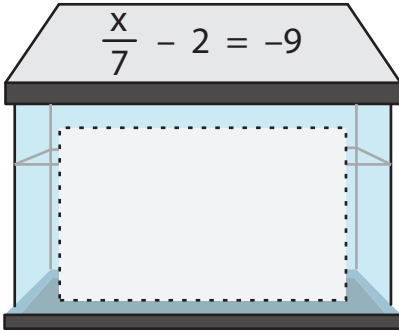
Solving Two Step Equations

Name _____

Score _____

TS:22

Solve the equation present in each fish tank and find its correct answer given below fish. Cut and glue the correct fish in the correct fish tank.





Solving Two Step Equations

Answer key

Name _____

Score _____

TS:22

Solve the equation present in each fish tank and find its correct answer given below fish. Cut and glue the correct fish in the correct fish tank.

$\frac{x}{7} - 2 = -9$

-49

$3(h - 6) = 12$

10

$2w + 1 = 9$

4

$5(g + 3) = -15$

-6

$\frac{a}{4} + 6 = 2$

-16

$\frac{d+7}{5} = 4$

13

$\frac{v-3}{4} = 2$

11

$7y - 1 = 13$

2

$\frac{p}{2} - 8 = -1$

14

