



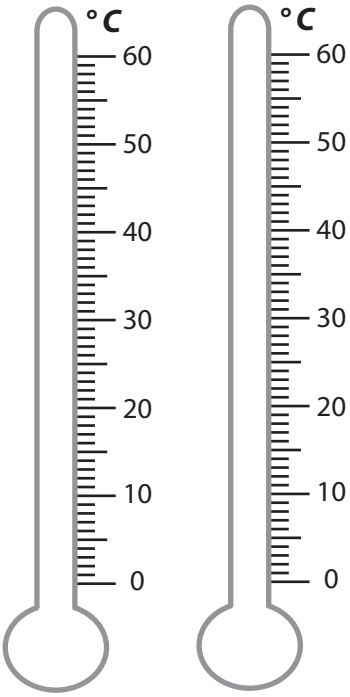
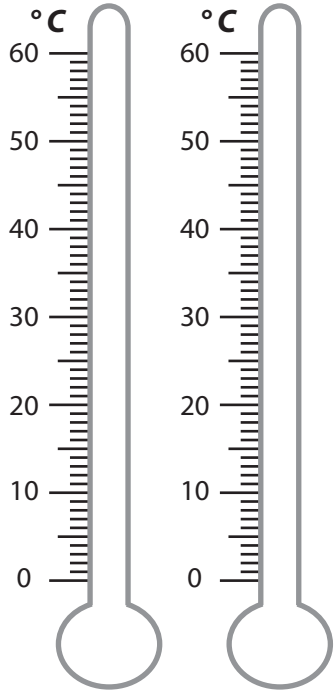
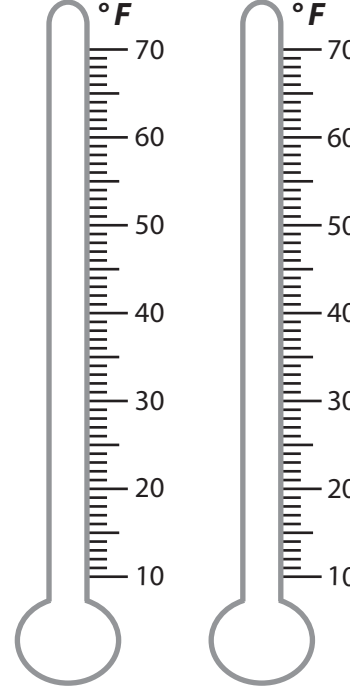

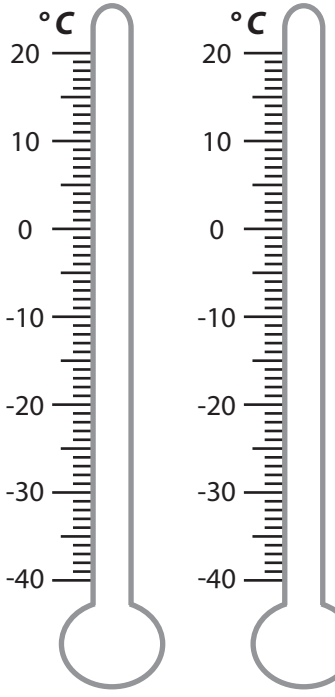
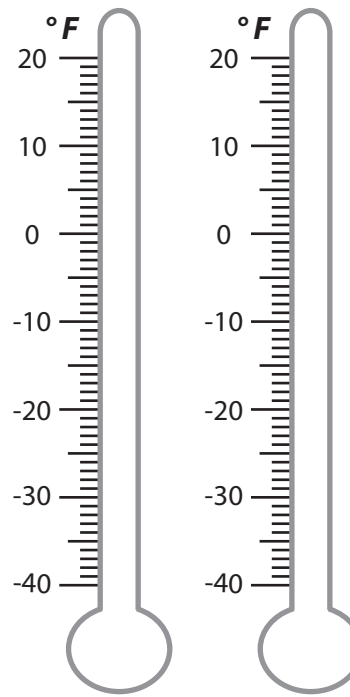
READING TEMPERATURE

Name _____

Score _____

TM:33

Mark the temperatures on the thermometers and shade the higher temperature thermometer red and the other blue.

<p>1) 56 °C 22 °C</p> 	<p>2) 40 °C 20 °C</p> 	<p>3) 32 °F 65 °F</p> 
<p>4) -28 °F -1 °F</p> 	<p>5) 16 °C -36 °C</p> 	<p>6) 11 °F -10 °F</p> 



READING TEMPERATURE

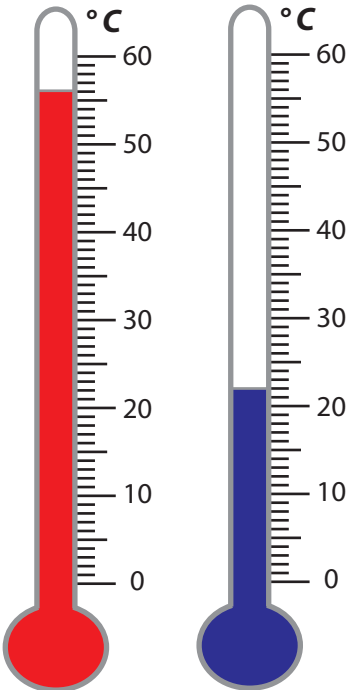
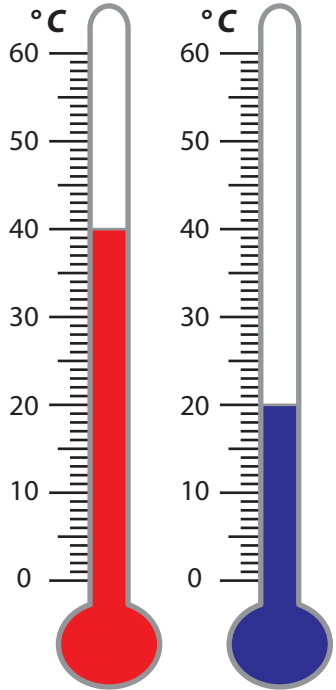
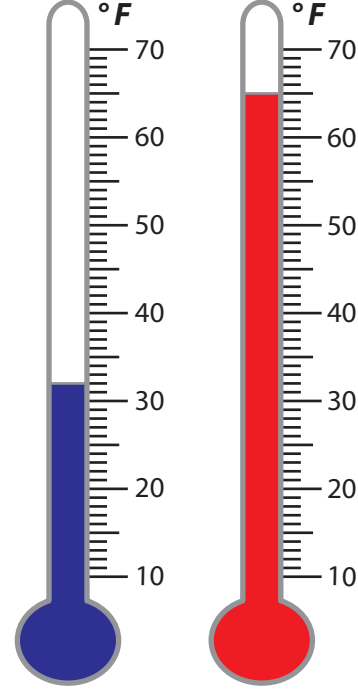
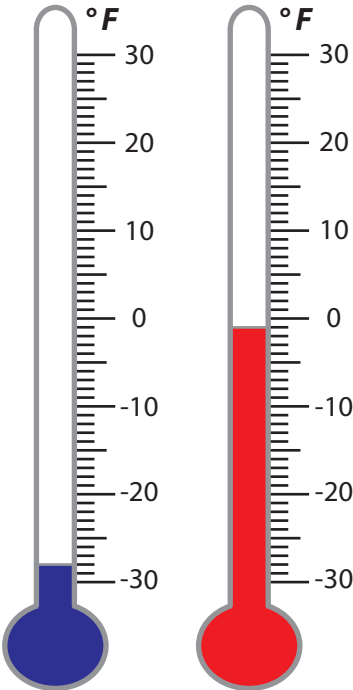
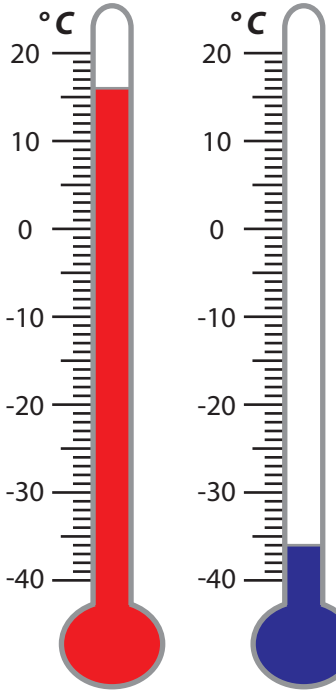
Name _____

Score _____

Answer key

TM:33

Mark the temperatures on the thermometers and shade the higher temperature thermometer red and the other blue.

<p>1) 56 °C 22 °C</p> 	<p>2) 40 °C 20 °C</p> 	<p>3) 32 °F 65 °F</p> 
<p>4) -28 °F -1 °F</p> 	<p>5) 16 °C -36 °C</p> 	<p>6) 11 °F -10 °F</p> 