




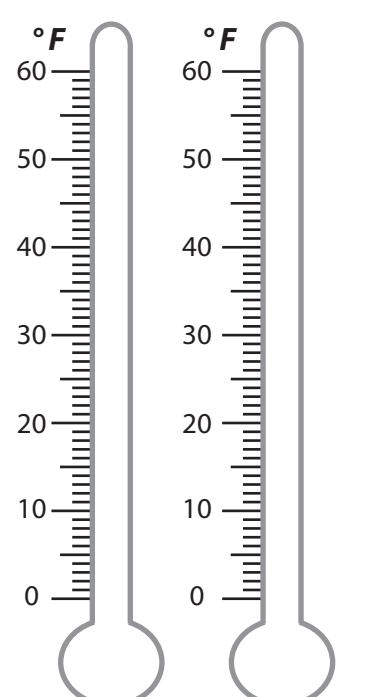
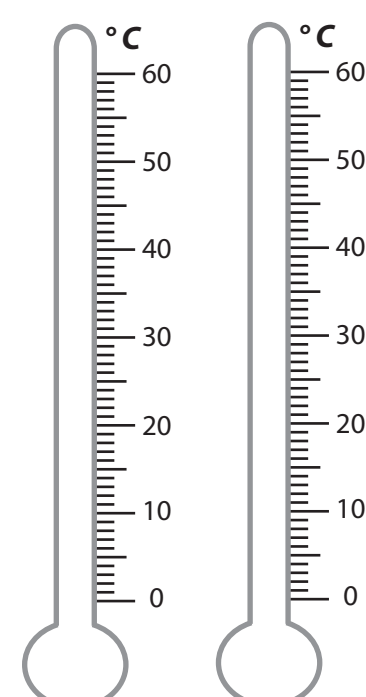
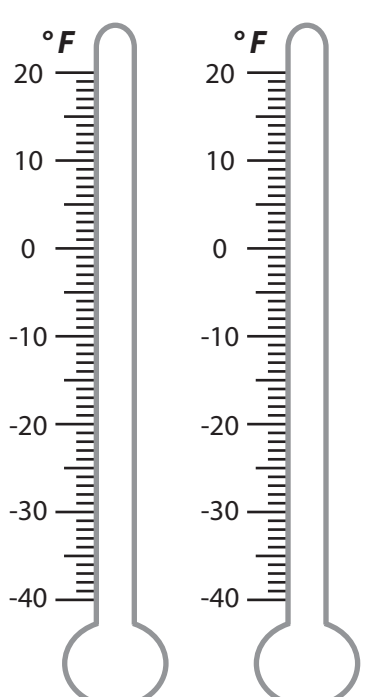
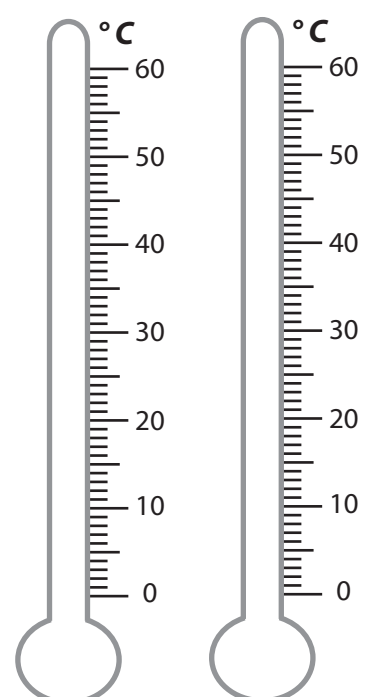
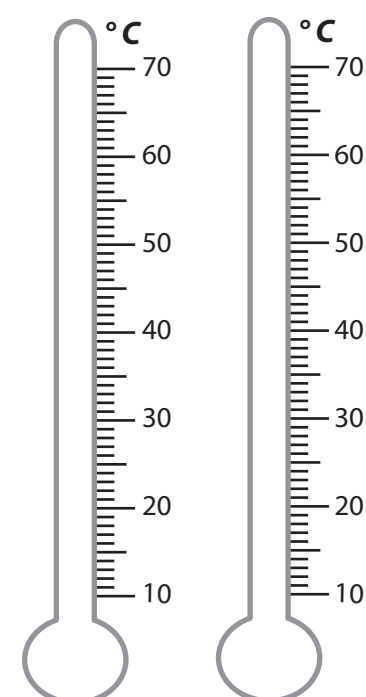
# READING TEMPERATURE

Name \_\_\_\_\_

Score \_\_\_\_\_

TM:31

Mark the temperatures on the thermometers and shade the higher temperature thermometer red and the other blue.

<p>1) 30 °C      11 °C</p> 	<p>2) 42 °F      60 °F</p> 	<p>3) 7 °C      48 °C</p> 
<p>4) -10 °F      -18 °F</p> 	<p>5) 23 °C      14 °C</p> 	<p>6) 12 °C      22 °C</p> 



# READING TEMPERATURE

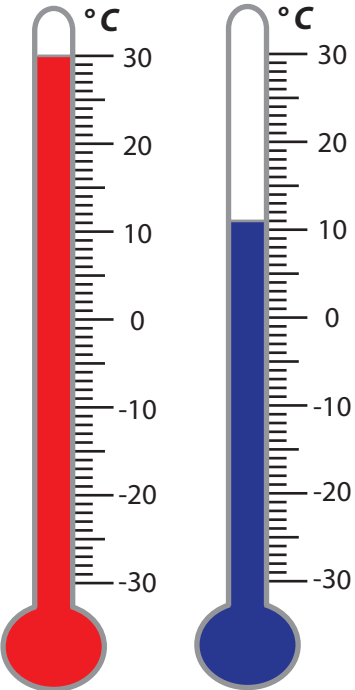
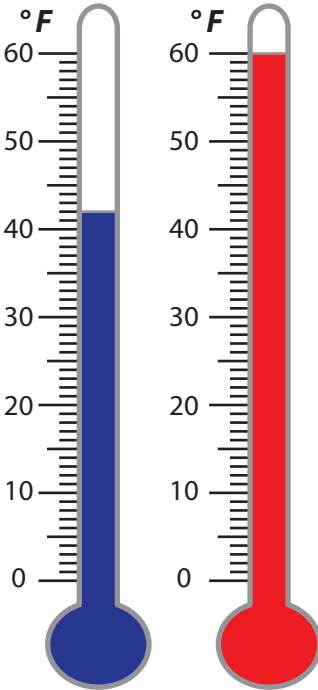
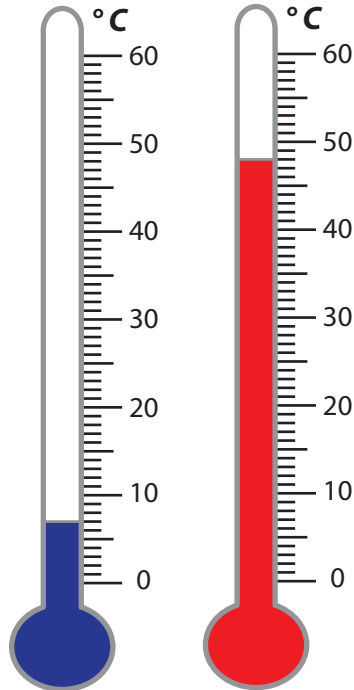
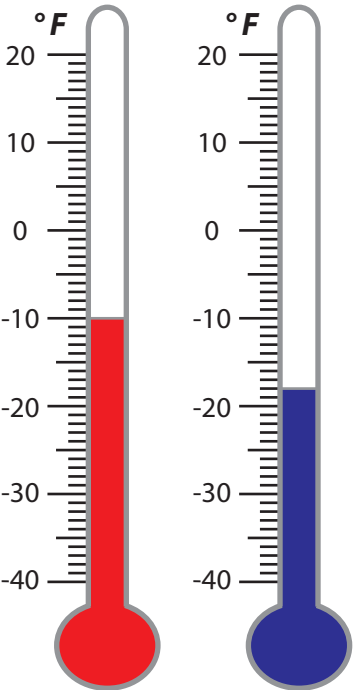
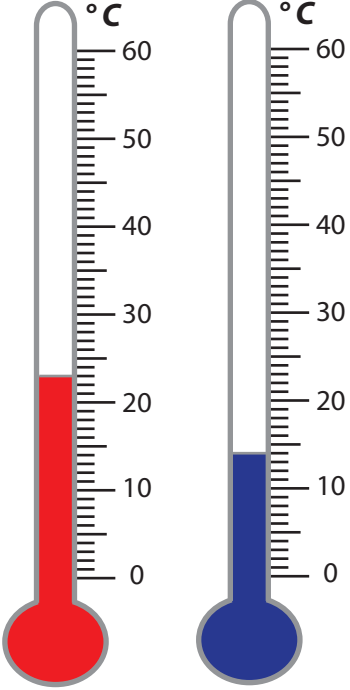
Name \_\_\_\_\_

Score \_\_\_\_\_

## Answer key

TM:31

Mark the temperatures on the thermometers and shade the higher temperature thermometer red and the other blue.

<p>1) 30 °C      11 °C</p> 	<p>2) 42 °F      60 °F</p> 	<p>3) 7 °C      48 °C</p> 
<p>4) -10 °F      -18 °F</p> 	<p>5) 23 °C      14 °C</p> 	<p>6) 12 °C      22 °C</p> 