



RATIO

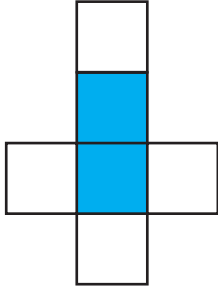
Name _____

Score _____

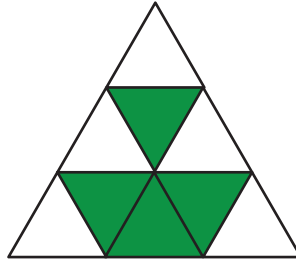
RO:18

Find the ratio of shaded region to unshaded region.

1)



2)




3)

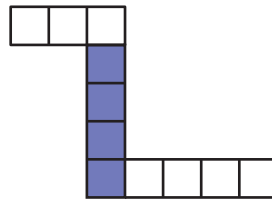


Find the ratio of unshaded region to shaded region.

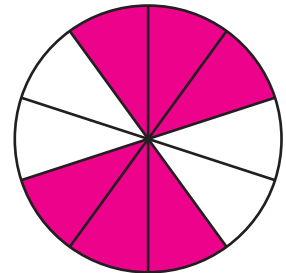
1)



2)



3)



Write the ratios in the form 1 : n.

1) 10 : 3

2) 15 : 75

3) 4 : 21

4) 18 : 9

Write the ratios in the form n : 1.

1) 7 : 28

2) 144 : 12

3) 63 : 18

4) 30 : 6



RATIO

Name _____

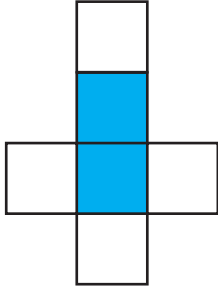
Score _____

Answer key

RO:18

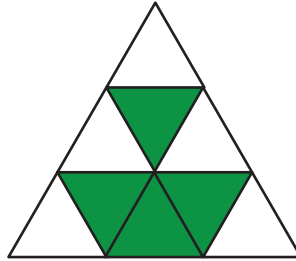
Find the ratio of shaded region to unshaded region.

1)



2 : 4 or 1 : 2

2)



4 : 5


3)



5 : 2

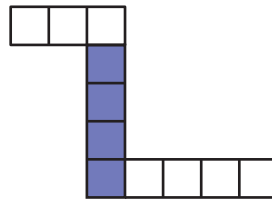
Find the ratio of unshaded region to shaded region.

1)



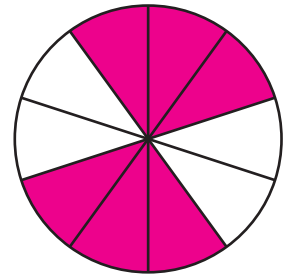
3 : 9 or 1 : 3

2)



7 : 4

3)



4 : 6 or 2 : 3

Write the ratios in the form 1 : n.

1) 10 : 3

1 : 0.3

2) 15 : 75

1 : 5

3) 4 : 21

1 : 5.25

4) 18 : 9

1 : 0.5

Write the ratios in the form n : 1.

1) 7 : 28

0.25 : 1

2) 144 : 12

12 : 1

3) 63 : 18

3.5 : 1

4) 30 : 6

5 : 1