



RATIO

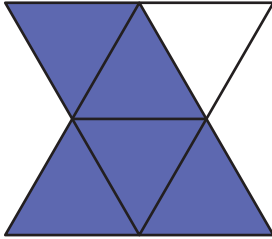
Name _____

Score _____

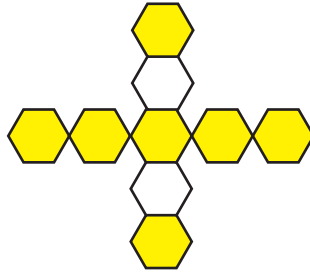
RO:17

Find the ratio of shaded region to unshaded region.

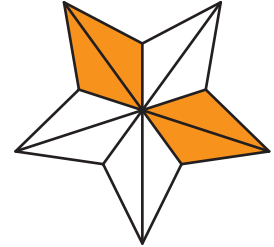
1)



2)

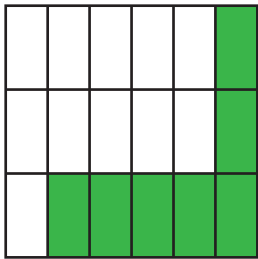


3)

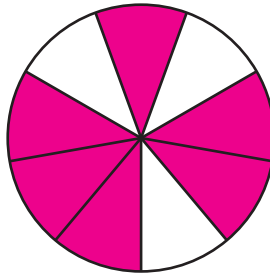


Find the ratio of unshaded region to shaded region.

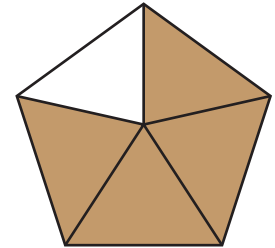
1)



2)



3)



Write the ratios in the form 1 : n.

1) 3 : 9

2) 16 : 88

3) 35 : 7

4) 4 : 12

Write the ratios in the form n : 1.

1) 55 : 11

2) 8 : 5

3) 29 : 10

4) 6 : 20



RATIO

Name _____

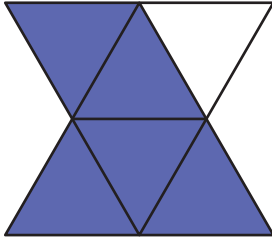
Score _____

Answer key

RO:17

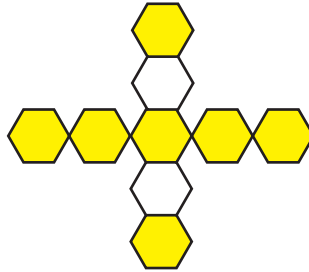
Find the ratio of shaded region to unshaded region.

1)



5 : 1

2)



7 : 2

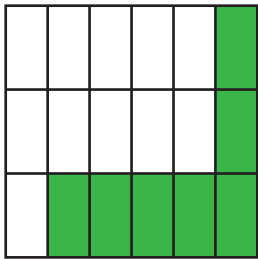
3)



4 : 6 or 2 : 3

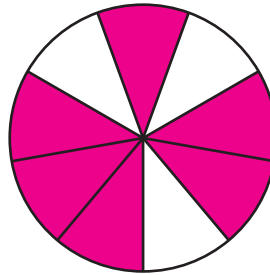
Find the ratio of unshaded region to shaded region.

1)



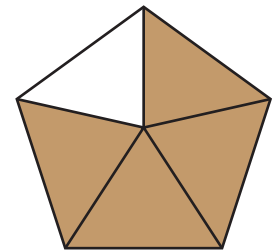
11 : 4

2)



3 : 3 or 1 : 1

3)



1 : 4

Write the ratios in the form 1 : n.

1) 3 : 9

1 : 3

2) 16 : 88

1 : 5.5

3) 35 : 7

1 : 0.2

4) 4 : 12

1 : 3

Write the ratios in the form n : 1.

1) 55 : 11

5 : 1

2) 8 : 5

1.6 : 1

3) 29 : 10

2.9 : 1

4) 6 : 20

0.3 : 1