



RATIO

Name _____

Score _____

RO:15

- 1) Color 3 caps green and the remaining pink.



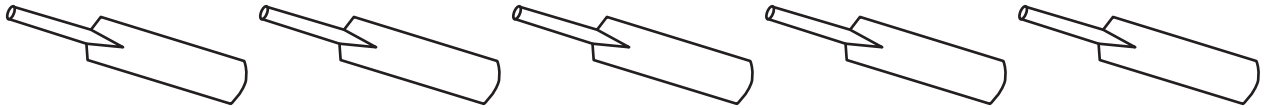
Write the ratio of green caps to pink caps. _____

- 2) Color 1 frock yellow and the remaining brown.



Write the ratio of yellow frocks to brown frocks. _____

- 3) Color 2 bats blue and the remaining red.



Write the ratio of red bats to blue bats. _____

- 1) Draw rectangles and kites in the ratio of 1 : 5

- 2) Draw triangles and stars in the ratio of 9 : 2

- 3) Draw circles and squares in the ratio of 3 : 4



RATIO

Name _____

Score _____

Answer key

RO:15


- 1) Color 3 caps green and the remaining pink.



Write the ratio of green caps to pink caps.

3 : 6 or 1 : 2

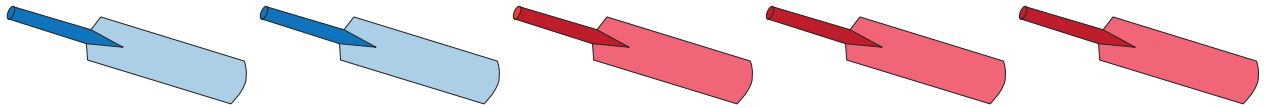
- 2) Color 1 frock yellow and the remaining brown.



Write the ratio of yellow frocks to brown frocks.

1 : 9

- 3) Color 2 bats blue and the remaining red.




Write the ratio of red bats to blue bats.

3 : 2

- 1) Draw rectangles and kites in the ratio of 1 : 5



- 2) Draw triangles and stars in the ratio of 9 : 2



- 3) Draw circles and squares in the ratio of 3 : 4

