



RATIO


Name _____

Score _____

RO:08


Express the ratio in three ways.

1) vegetables to carrots



Words	Ratio	Fraction

2) spoons to knives



Words	Ratio	Fraction

3) glass to water bottles



Words	Ratio	Fraction

4) Write the ratio of 5 parrots to 6 penguins.

Words	Ratio	Fraction

5) Write the ratio of 8 vases to 4 flowers.

Words	Ratio	Fraction



RATIO

Name _____


Score _____

Answer key

RO:08


Express the ratio in three ways.

1) vegetables to carrots



Words	Ratio	Fraction
12 to 8 or 3 to 2	12 : 8 or 3 : 2	$\frac{12}{8}$ or $\frac{3}{2}$

2) spoons to knives



Words	Ratio	Fraction
7 to 6	7 : 6	$\frac{7}{6}$

3) glass to water bottles



Words	Ratio	Fraction
1 to 5	1 : 5	$\frac{1}{5}$

4) Write the ratio of 5 parrots to 6 penguins.

Words	Ratio	Fraction
5 to 6	5 : 6	$\frac{5}{6}$

5) Write the ratio of 8 vases to 4 flowers.

Words	Ratio	Fraction
8 to 4 or 2 to 1	8 : 4 or 2 : 1	$\frac{8}{4}$ or $\frac{2}{1}$