



RATIO


Name _____

Score _____

RO:07


Express the ratio in three ways.

1) books to pencils



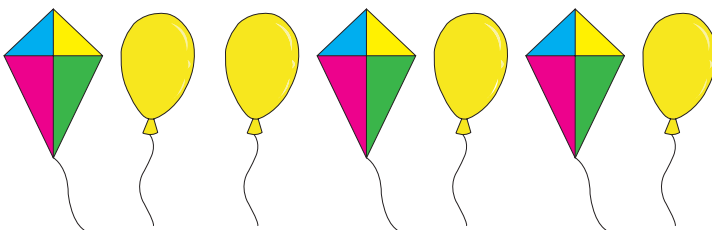
Words	Ratio	Fraction

2) pomegranates to fruits



Words	Ratio	Fraction

3) balloons to kites



Words	Ratio	Fraction

4) Write the ratio of 15 cats to 7 dogs.

Words	Ratio	Fraction

5) Write the ratio of 2 chocolates to 9 cookies.

Words	Ratio	Fraction



RATIO

Name _____


Score _____

Answer key

RO:07


Express the ratio in three ways.

1) books to pencils



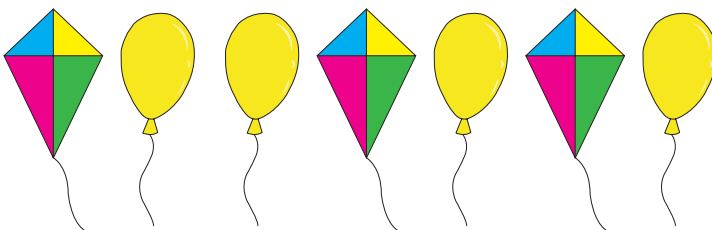
Words	Ratio	Fraction
4 to 5	4 : 5	$\frac{4}{5}$

2) pomegranates to fruits



Words	Ratio	Fraction
6 to 10 or 3 to 5	6 : 10 or 3 : 5	$\frac{6}{10}$ or $\frac{3}{5}$

3) balloons to kites



Words	Ratio	Fraction
4 to 3	4 : 3	$\frac{4}{3}$

4) Write the ratio of 15 cats to 7 dogs.

Words	Ratio	Fraction
15 to 7	15 : 7	$\frac{15}{7}$

5) Write the ratio of 2 chocolates to 9 cookies.

Words	Ratio	Fraction
2 to 9	2 : 9	$\frac{2}{9}$