



ESTIMATING WEIGHT


Name _____

Score _____

MW:35

Estimate the weight of the objects.


1)



a) 2 g

b) 500 g

2)



a) 10 tons

b) 100 tons


3)



a) 20 g

b) 0.02 g

4)



a) 20 lb

b) 2 lb

5)



a) 3 lb

b) 3 oz

6)



a) 500 g

b) 50 g



ESTIMATING WEIGHT

Name _____


Score _____

Answer key

MW:35

Estimate the weight of the objects.


1)



a) 2 g

b) 500 g

2)



a) 10 tons

b) 100 tons


3)



a) 20 g

b) 0.02 g

4)



a) 20 lb

b) 2 lb

5)



a) 3 lb

b) 3 oz

6)



a) 500 g

b) 50 g