



ESTIMATING WEIGHT


Name _____

Score _____

MW:33

Estimate the weight of the objects.

1)



a) 3kg

b) 100 g

2)



a) 4 oz

b) 4 lb

3)



a) 12 lb

b) 2 lb

4)



a) 5 kg

b) 50 g


5)



a) 50 oz

b) 6 oz

6)



a) 100 kg

b) 200 g



Name _____

Score _____


ESTIMATING WEIGHT

Answer key

MW:33

Estimate the weight of the objects.

1)



- a) 3kg b) 100 g

2)



- a) 4 oz b) 4 lb

3)



- a) 12 lb b) 2 lb

4)




- a) 5 kg b) 50 g

5)



- a) 50 oz b) 6 oz

6)



- a) 100 kg b) 200 g