



# MEASURING WEIGHT

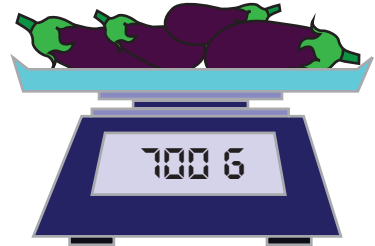
Name \_\_\_\_\_

Score \_\_\_\_\_


MW:13

Compare the weight of objects shown. Use  $>$ ,  $<$  or  $=$  symbol.

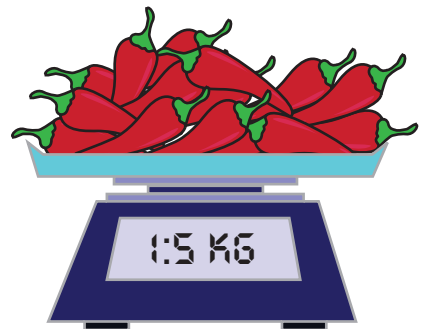

1)



2)



3)



4)





# MEASURING WEIGHT

Name \_\_\_\_\_

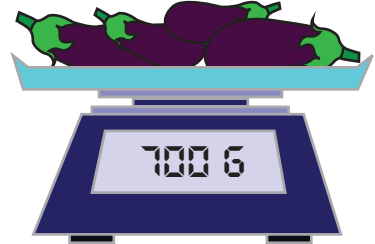
Score \_\_\_\_\_

## Answer key

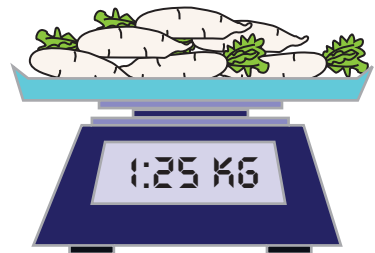

MW:13

Compare the weight of objects shown. Use  $>$ ,  $<$  or  $=$  symbol.

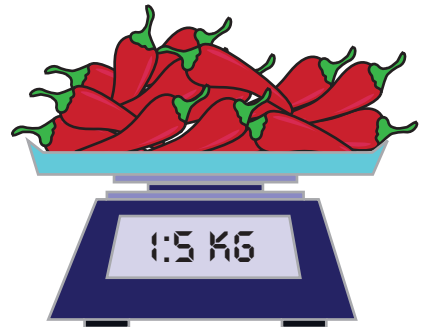
1)



2)



3)



4)

