



ORDERING WEIGHT


Name _____

Score _____


MW:08

Use numbers 1-3 to order the objects from the heaviest to lightest.

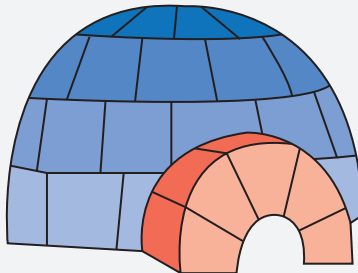
1)





2)



3)



4)





ORDERING WEIGHT

Name _____


Score _____

Answer key

MW:08

Use numbers 1-3 to order the objects from the heaviest to lightest.

1)



1



3




2

2)



3




1

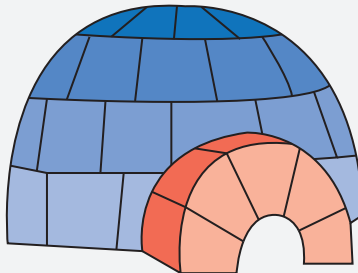


2

3)



2




1




3

4)



2



3



1