



ORDERING WEIGHT


Name _____

Score _____



MW:07

Use numbers 1-3 to order the objects from the heaviest to lightest.

1)




2)



3)



4)





ORDERING WEIGHT

Name _____

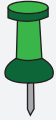
Score _____

Answer key

MW:07

Use numbers 1-3 to order the objects from the heaviest to lightest.


1)



3




2



1


2)



1



3



2

3)



2



3




1


4)



2



1



3