



ORDERING WEIGHT


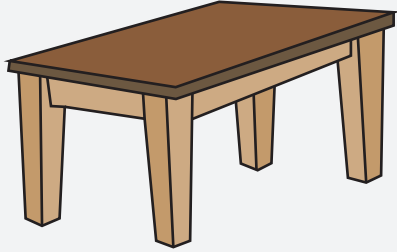
Name _____

Score _____


MW:06

Use numbers 1-3 to order the objects from the heaviest to lightest.

1)



2)



3)



4)





ORDERING WEIGHT

Name _____

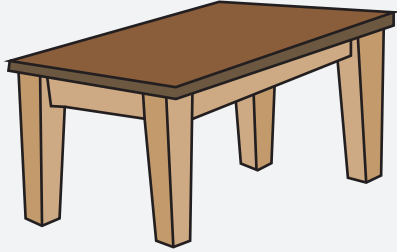
Score _____

Answer key

MW:06

Use numbers 1-3 to order the objects from the heaviest to lightest.


1)



1




3



2

2)



1



2



3

3)



2



1



3

4)



3



2



1