



ORDERING WEIGHT

Name _____

Score _____



MW:04

Use numbers 1-3 to order the objects from the lightest to heaviest.



1)



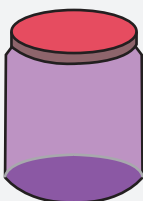
2)



3)



4)





ORDERING WEIGHT

Name _____

Score _____

Answer key

MW:04

Use numbers 1-3 to order the objects from the lightest to heaviest.

1)



2




3



1

2)



3



1




2

3)



1

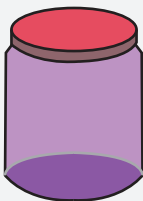


3



2

4)



2



1



3