



ESTIMATING LENGTH


Name _____

Score _____

ML:36

Estimate the length of each object.


1)



a) 4 m

b) 20 cm

2)



a) 15 ft

b) 10 cm

3)



a) 15 cm

b) 3 m

4)



a) 25 cm

b) 25 mm

5)



a) 10 mm

b) 8 in



ESTIMATING LENGTH

Name _____


Score _____

Answer key

ML:36

Estimate the length of each object.


1)



a) 4 m

b) 20 cm

2)



a) 15 ft

b) 10 cm

3)



a) 15 cm

b) 3 m

4)



a) 25 cm

b) 25 mm

5)



a) 10 mm

b) 8 in