



ESTIMATING LENGTH

Name _____

Score _____

ML:35

Estimate the length of each object.

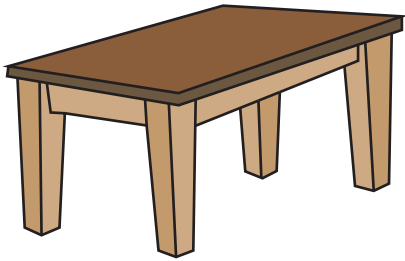
1)



a) 2 m

b) 5 cm

2)



a) 60 in

b) 25 cm

3)



a) 25 ft

b) 3 m

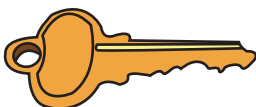
4)



a) 10 mm

b) 10 cm

5)



a) 5 cm

b) 5 m



ESTIMATING LENGTH

Name _____

Score _____

Answer key

ML:35

Estimate the length of each object.

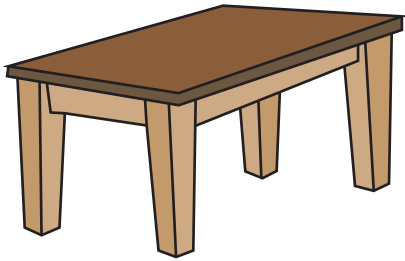
1)



a) 2 m

b) 5 cm

2)



a) 60 in

b) 25 cm

3)



a) 25 ft

b) 3 m

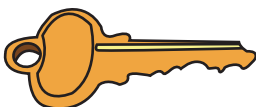
4)



a) 10 mm

b) 10 cm

5)



a) 5 cm

b) 5 m