



ESTIMATING LENGTH

Name _____

Score _____

ML:34

Estimate the length of each object.

1)



a) 1 m

b) 10 cm


2)



a) 5 in

b) 1 cm


3)



a) 30 cm

b) 30 m

4)



a) 50 cm

b) 50 ft

5)



a) 20 m

b) 10 cm



ESTIMATING LENGTH

Name _____


Score _____

Answer key

ML:34

Estimate the length of each object.

1)



a) 1 m

b) 10 cm


2)



a) 5 in

b) 1 cm


3)



a) 30 cm

b) 30 m

4)



a) 50 cm

b) 50 ft

5)



a) 20 m

b) 10 cm