



# MEASURING LENGTH

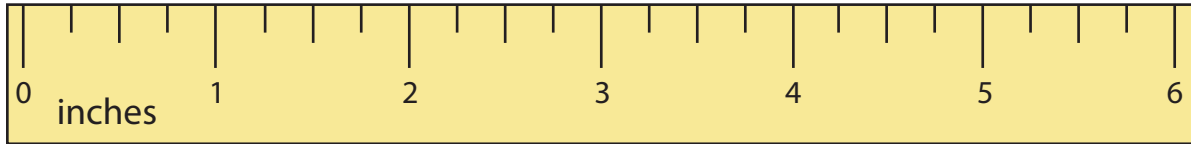
Name \_\_\_\_\_

Score \_\_\_\_\_

ML:15

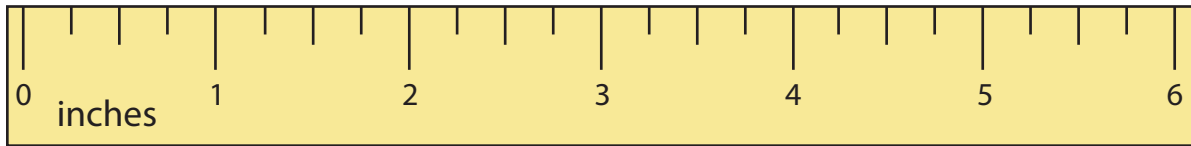
Measure the length of each ribbon and note down the exact length.  
(Quarter, Half and Three-fourth).

1)



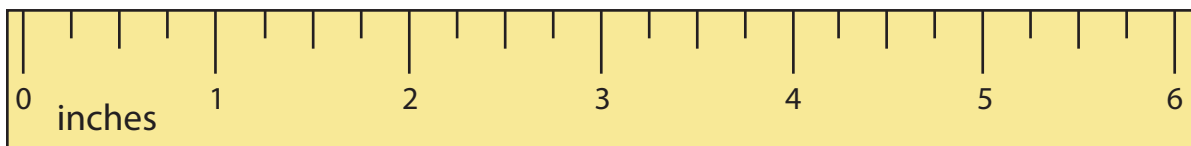
\_\_\_\_\_

2)



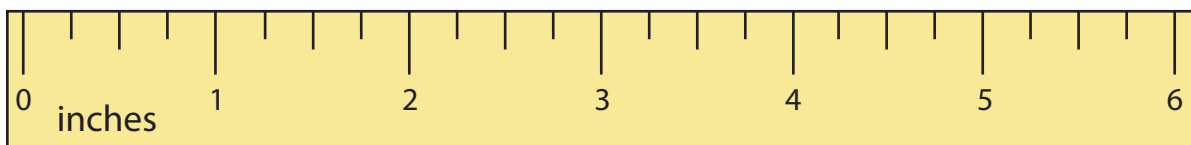
\_\_\_\_\_

3)



\_\_\_\_\_

4)



\_\_\_\_\_



# MEASURING LENGTH

Name \_\_\_\_\_

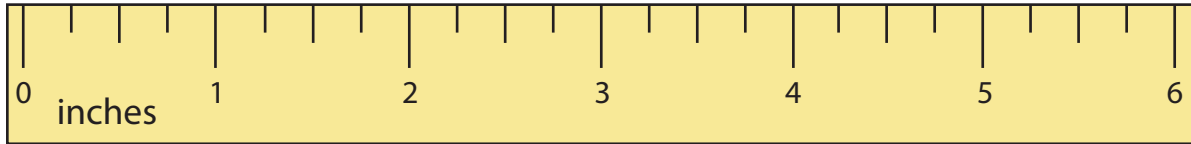
Score \_\_\_\_\_

## Answer key

ML:15

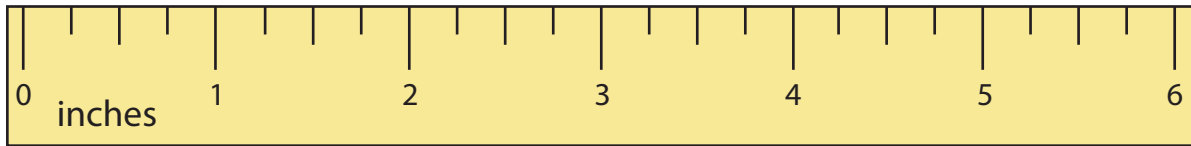
Measure the length of each ribbon and note down the exact length.  
(Quarter, Half and Three-fourth).

1)



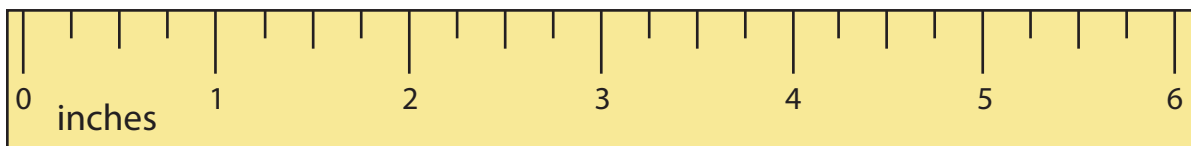
**$2 \frac{1}{2}$  or 2.5 in**

2)



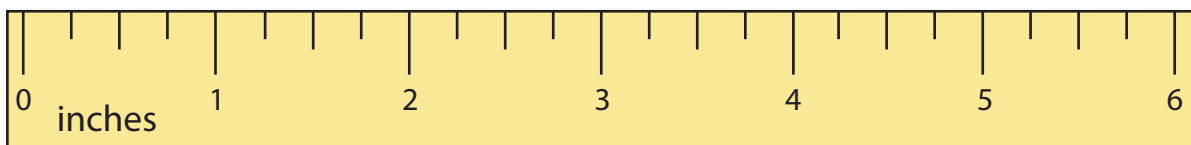
**$3 \frac{1}{4}$  or 3.25 in**

3)



**$5 \frac{1}{2}$  or 5.5 in**

4)



**$1 \frac{3}{4}$  or 1.75 in**