



MEASURING LENGTH

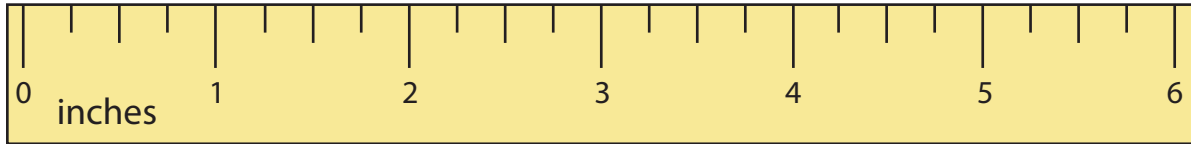
Name _____

Score _____

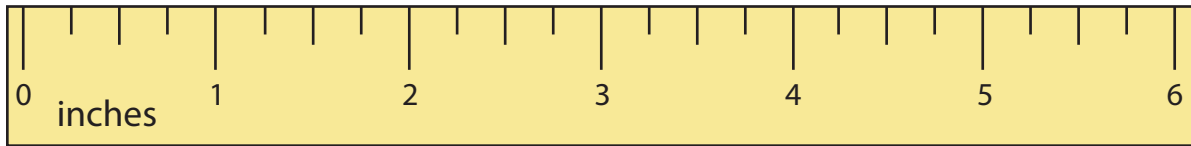
ML:14

Measure the length of each ribbon and note down the exact length.
(Quarter, Half and Three-fourth).

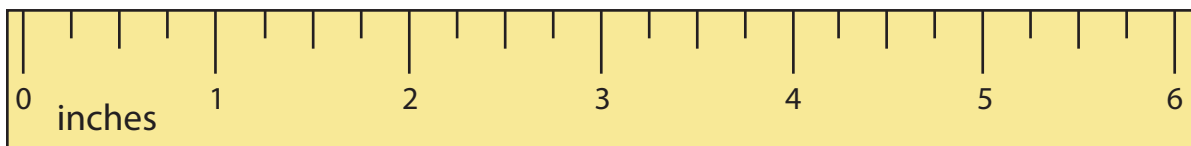
1)



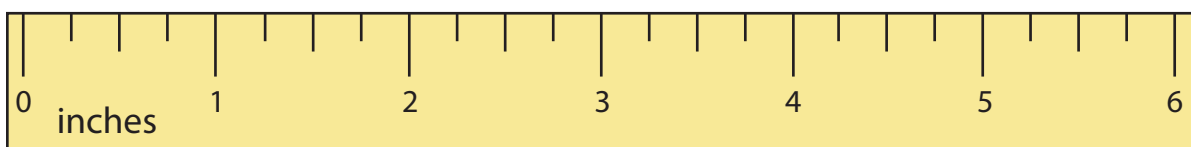
2)



3)



4)





MEASURING LENGTH

Name _____

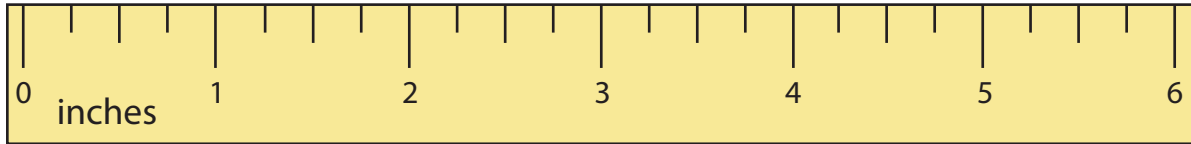
Score _____

Answer key

ML:14

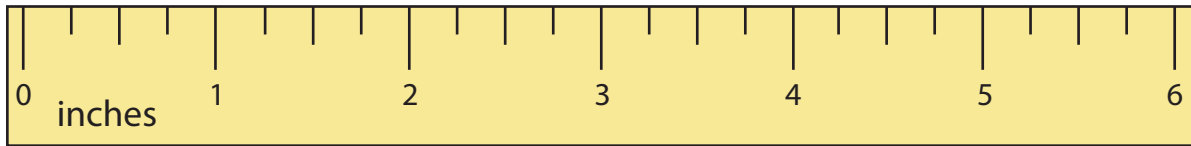
Measure the length of each ribbon and note down the exact length.
(Quarter, Half and Three-fourth).

1)



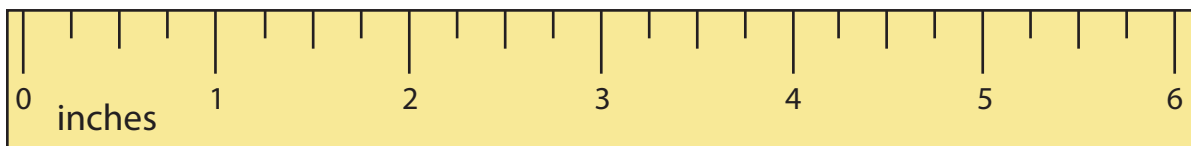
$5 \frac{3}{4}$ or 5.75 in

2)



$1 \frac{1}{4}$ or 1.25 in

3)



$3 \frac{1}{2}$ or 3.5 in

4)



$4 \frac{3}{4}$ or 4.75 in