



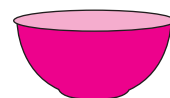

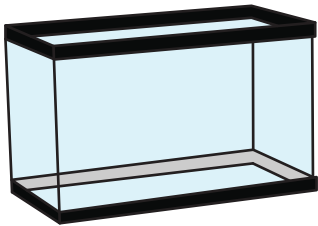
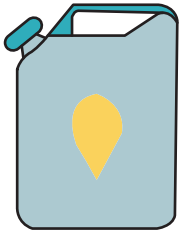

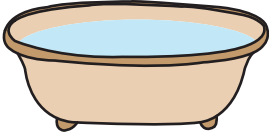
Measuring Capacity

Name _____

Score _____

MC:17

Number the objects from the least to greatest capacity. (1, 2, 3)





Measuring Capacity

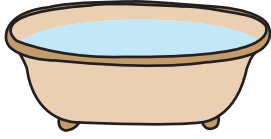
Name _____

Score _____

Answer key

MC:17


Number the objects from the least to greatest capacity. (1, 2, 3)



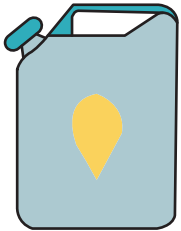
2



1



3



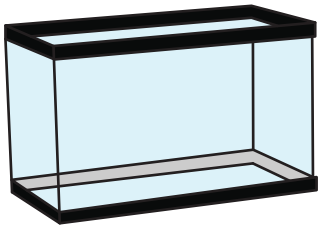
3



2




1



3



1



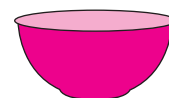
2



1



3



2