



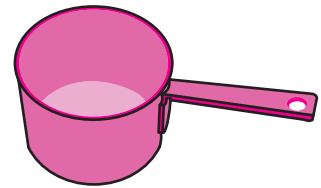
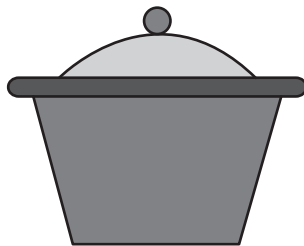

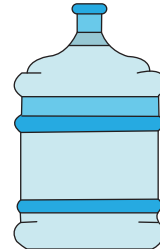
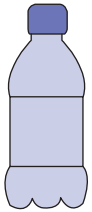
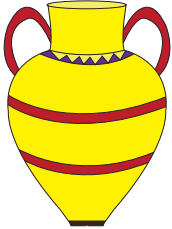
Measuring Capacity

Name _____

Score _____

MC:16

Number the objects from the least to greatest capacity. (1, 2, 3)





Measuring Capacity

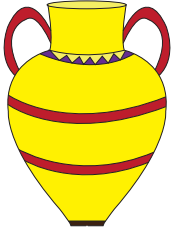
Name _____

Score _____

Answer key

MC:16

Number the objects from the least to greatest capacity. (1, 2, 3)



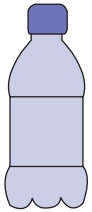
3



2



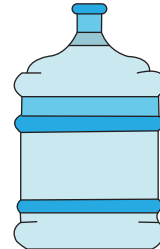
1




2



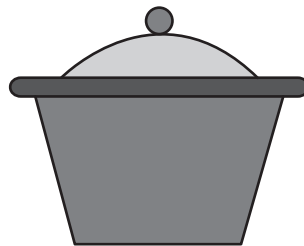
1



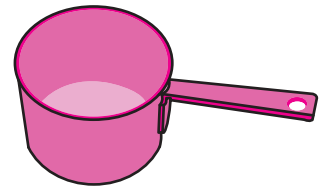
3



1



3



2



2



3



1