



Measuring Capacity

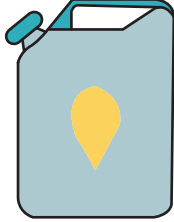
Name _____

Score _____

MC:14

Estimate the capacity of each object.

1)



- 3 gal 3 c 3 pt

5)



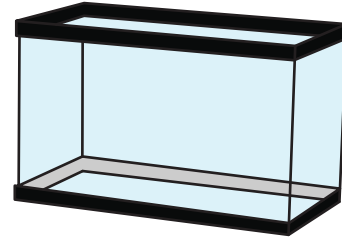
- 1 gal 5 c 7 fl.oz

2)



- 3 tsp 2 qt 2 tbsp

6)



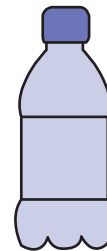
- 50 gal 2 qt 8 c

3)



- 1 pt 1 gal 1 c

7)




- 1 tbsp 1 c 2 pt

4)



- 2 qt 1 pt 2 tsp

8)



- 0.5 qt 1 gal 2 c



Measuring Capacity

Name _____


Score _____

Answer key

MC:14

Estimate the capacity of each object.

1)



3 gal 3 c 3 pt

5)



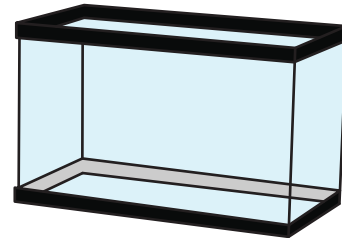
1 gal 5 c 7 fl.oz

2)



3 tsp 2 qt 2 tbsp

6)



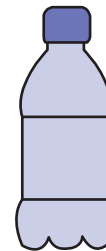
50 gal 2 qt 8 c

3)



1 pt 1 gal 1 c

7)



1 tbsp 1 c 2 pt

4)



2 qt 1 pt 2 tsp

8)



0.5 qt 1 gal 2 c