



Measuring Capacity

Name _____

Score _____

MC:13

Estimate the capacity of each object.

1)



- 1 c 1.5 qt 1 gal

5)



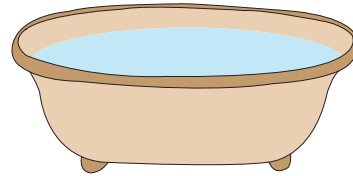
- 1 c 5 gal 2 tbsp

2)



- 1 c 1 pt 1 tsp

6)



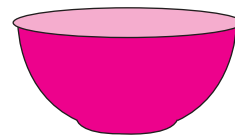
- 5 fl.oz 2qt 7 gal

3)



- 4 gal 2 c 1 pt

7)




- 3 tbsp 2 c 2 gal

4)



- 1 tsp 6 gal 1 pt

8)



- 3 gal 2 c 1 pt



Measuring Capacity

Name _____

Score _____

Answer key

MC:13

Estimate the capacity of each object.

1)



- 1 c 1.5 qt 1 gal

5)



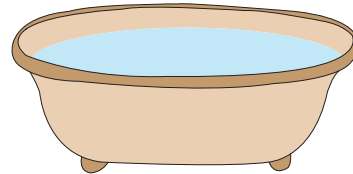
- 1 c 5 gal 2 tbsp

2)



- 1 c 1 pt 1 tsp

6)



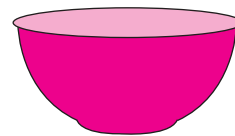
- 5 fl.oz 2qt 7 gal

3)



- 4 gal 2 c 1 pt

7)




- 3 tbsp 2 c 2 gal

4)



- 1 tsp 6 gal 1 pt

8)



- 3 gal 2 c 1 pt