



Measuring Capacity

Name _____

Score _____

MC:12

Estimate the capacity of each object.

1)



- 2 L 200 mL 20 mL

5)




- 200 mL 250 mL 2 L

2)



- 3 L 0.5 L 30 mL

6)



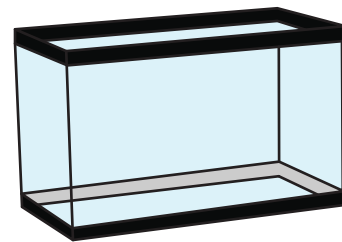
- 2 mL 200 mL 1 L

3)



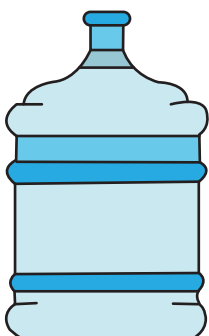
- 0.5 mL 50 mL 500 mL

7)



- 10 L 1 L 1.5 L

4)



- 2 L 15 L 15 mL

8)



- 5 L 0.1 mL 5 mL



Measuring Capacity

Name _____

Score _____

Answer key

MC:12

Estimate the capacity of each object.

1)



2 L 200 mL 20 mL

5)




200 mL 250 mL 2 L

2)



3 L 0.5 L 30 mL

6)



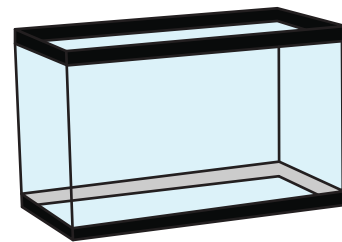
2 mL 200 mL 1 L

3)



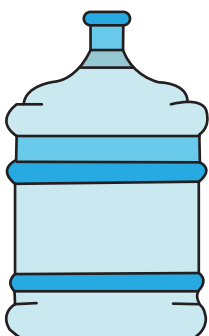
0.5 mL 50 mL 500 mL

7)



10 L 1 L 1.5 L

4)



2 L 15 L 15 mL

8)



5 L 0.1 mL 5 mL