



# Measuring Capacity

Name \_\_\_\_\_

Score \_\_\_\_\_

MC:11

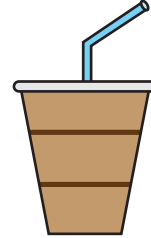
Estimate the capacity of each object.

1)



- 100 mL    1 L    1.5 mL

5)



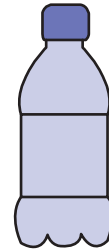
- 4 mL    400 mL    1.5 L

2)



- 450 mL    900 mL    4 L

6)



- 100 mL    1 mL    1 L

3)



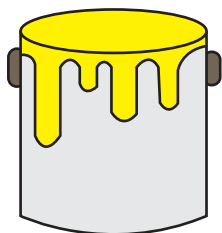
- 2.5 mL    250 mL    2 mL

7)



- 3 L    200 mL    500 mL

4)



- 1 L    100 mL    50 mL

8)



- 1 L    150 mL    1.5 mL



# Measuring Capacity

Name \_\_\_\_\_

Score \_\_\_\_\_

**Answer key**

MC:11

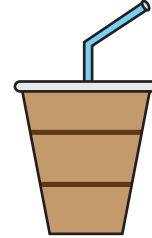
Estimate the capacity of each object.

1)



100 mL    1 L    1.5 mL

5)



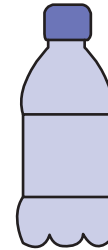
4 mL    400 mL    1.5 L

2)



450 mL    900 mL    4 L

6)



100 mL    1 mL    1 L

3)



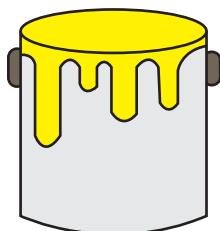
2.5 mL    250 mL    2 mL

7)



3 L    200 mL    500 mL

4)



1 L    100 mL    50 mL

8)



1 L    150 mL    1.5 mL