



Measuring Capacity

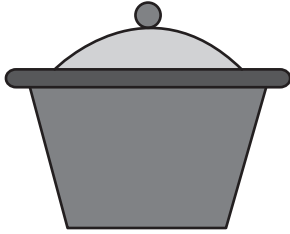
Name _____

Score _____

MC:10

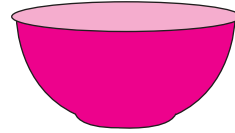
Estimate the capacity of each object.

1)



0.5 L 900 mL 5 L

5)



150 mL 2 L 1.5 mL

2)



50 mL 500 mL 4 L

6)




1 L 20 mL 200 mL

3)



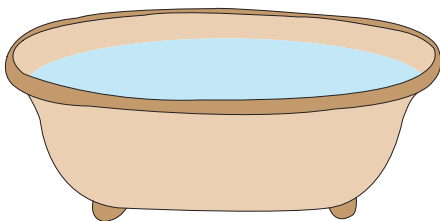
200 mL 2 L 20 mL

7)



150 mL 1.5 L 5 L

4)



1 L 7 L 700 mL

8)



2.5 mL 5 mL 25 mL



Measuring Capacity

Name _____

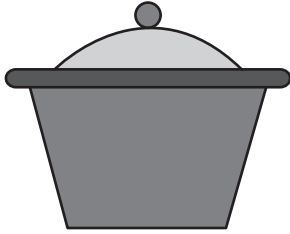
Score _____

Answer key

MC:10

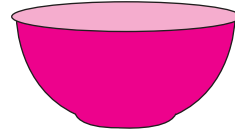
Estimate the capacity of each object.

1)



0.5 L 900 mL 5 L

5)



150 mL 2 L 1.5 mL

2)



50 mL 500 mL 4 L

6)




1 L 20 mL 200 mL

3)



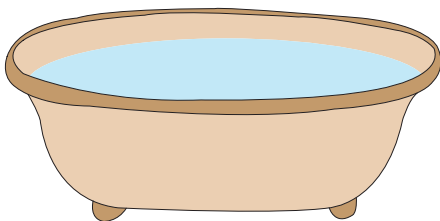
200 mL 2 L 20 mL

7)



150 mL 1.5 L 5 L

4)



1 L 7 L 700 mL

8)



2.5 mL 5 mL 25 mL