



Capacity

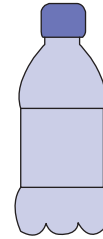

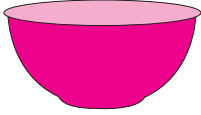
More than / Less than

Name _____




Score _____

MC:09

Circle the objects whose capacity is more than 1 quart.



Circle the objects whose capacity is less than 1 quart.



Do the objects shown below hold more than one quart.



Yes / No



Yes / No



Yes / No



Capacity More than / Less than

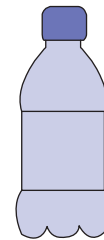

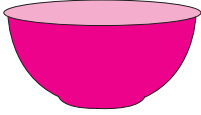
Name _____

Score _____






Answer key

MC:09

Circle the objects whose capacity is more than 1 quart.



Circle the objects whose capacity is less than 1 quart.



Do the objects shown below hold more than one quart.



~~Yes~~ / No



~~Yes~~ / No



Yes / ~~No~~