



Capacity




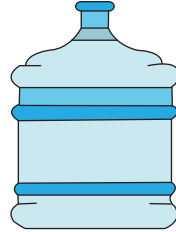

More than / Less than

Name _____

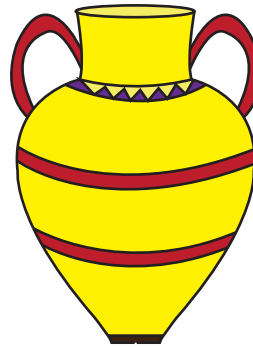
Score _____

MC:04

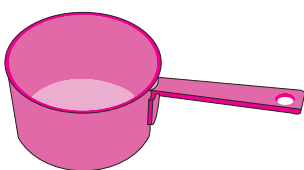
Circle the objects whose capacity is more than 1 liter.




Circle the objects whose capacity is less than 1 liter.



Do the objects shown below hold more than two litres.



Yes / No



Yes / No



Yes / No



Capacity More than / Less than


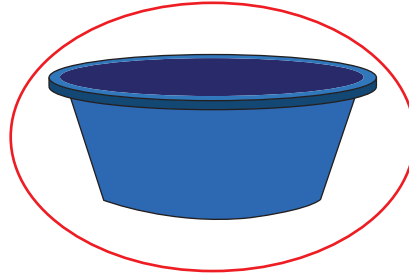

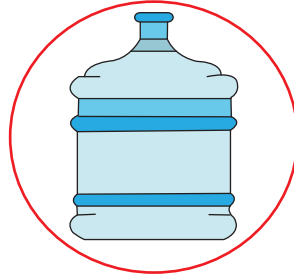
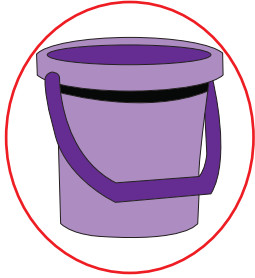
Name _____

Score _____


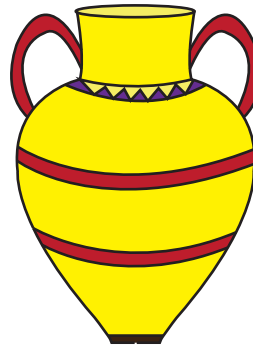
Answer key

MC:04

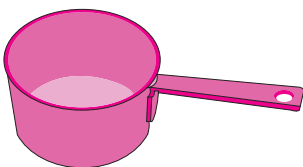
Circle the objects whose capacity is more than 1 liter.




Circle the objects whose capacity is less than 1 liter.



Do the objects shown below hold more than two litres.



Yes / ~~No~~



~~Yes~~ / No



Yes / ~~No~~