




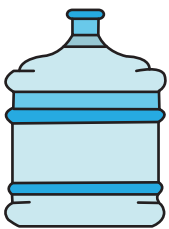

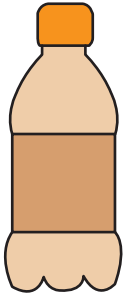

Capacity - More / Less

Name _____

Score _____

MC:03

Check mark the object which holds more fluid and cross out the object which holds less.





Capacity - More / Less

Name _____

Score _____

Answer key

MC:03

Check mark the object which holds more fluid and cross out the object which holds less.

