



Heavy vs Light

Name _____

Score _____

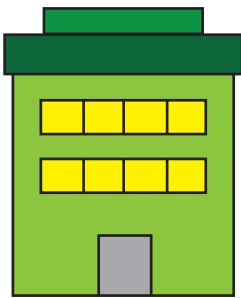
BMS:I:24

Check mark the heaviest object and cross out the lightest one.


1)



2)



3)



4)





Heavy vs Light

Name _____

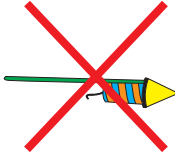

Score _____

Answer key


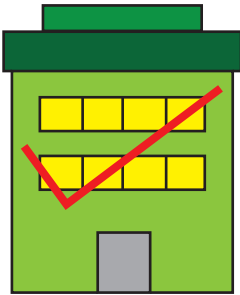
BMS:I:24

Check mark the heaviest object and cross out the lightest one.


1)



2)



3)



4)

