



# Long vs Short

Name \_\_\_\_\_

Score \_\_\_\_\_

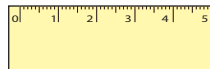
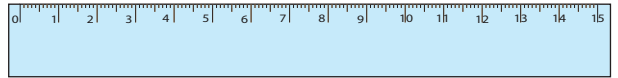
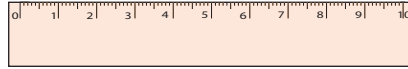
BMS:I:18

Check mark the longest object and cross out the shortest one.

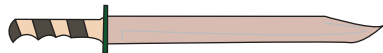
1)



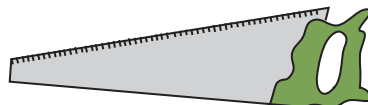
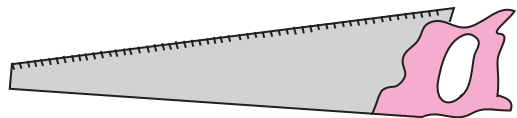

2)



3)



4)





# Long vs Short

Answer key


Name \_\_\_\_\_

Score \_\_\_\_\_

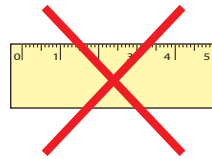
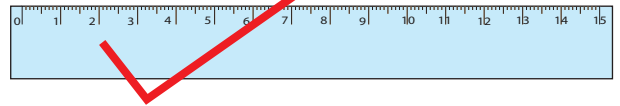
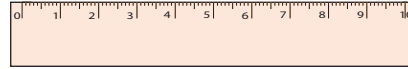
BMS:I:18

Check mark the longest object and cross out the shortest one.

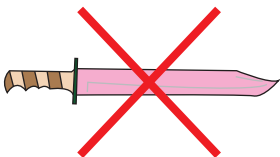
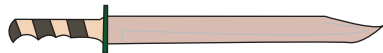
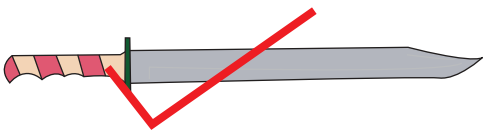
1)



2)



3)



4)

