



Long vs Short

Name _____

Score _____



BMS:I:16

Number the objects from longest to shortest.

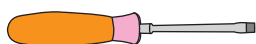
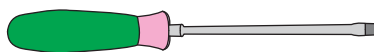
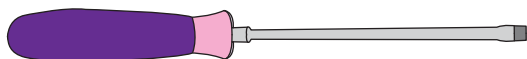
1)



2)



3)



4)





Long vs Short

Answer key

Name _____

Score _____

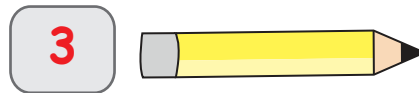
BMS:I:16

Number the objects from longest to shortest.

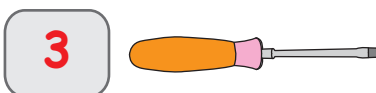
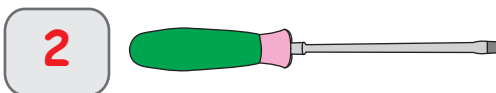
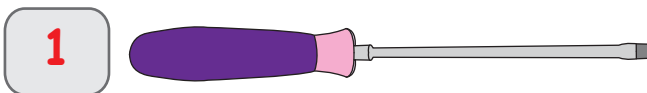
1)



2)



3)



4)

