



TALLY MARKS




Name _____

Score _____




Circle the correct answer.

TS30




Which tally marks represent number 8?

		
---	---	---




Which tally marks represent number 14?

		
---	---	---




Which tally marks represent number 5?

		
---	---	---

Which tally marks represent number 10?

		
---	---	---

Which tally marks represent number 1?

		
---	---	---



TALLY MARKS

Name _____

Score _____

Answer key

TS30

Circle the correct answer.

Which tally marks represent number 8?

--	--	--

Which tally marks represent number 14?

--	--	--

Which tally marks represent number 5?

--	--	--

Which tally marks represent number 10?

--	--	--

Which tally marks represent number 1?

--	--	--