



TYPES OF TRIANGLES BASED ON ANGLES

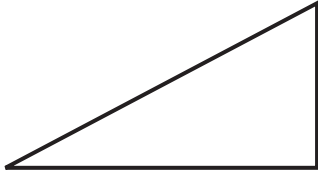
Name _____

Score _____

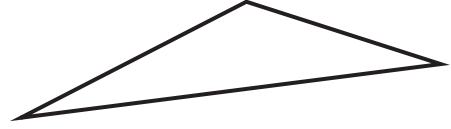
CT:16

Identify each triangle as acute, right, or obtuse.


1)



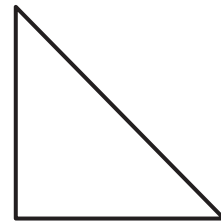
2)



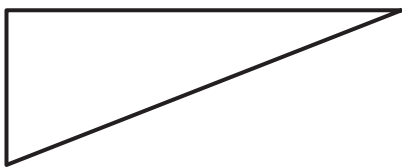
3)



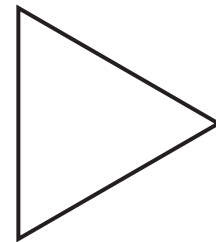
4)



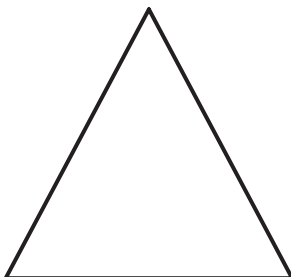
5)



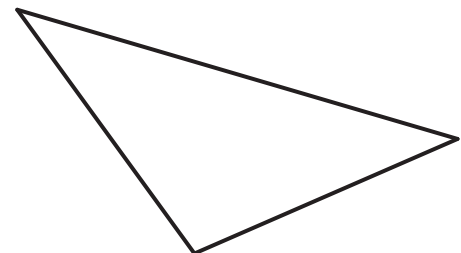
6)



7)



8)





TYPES OF TRIANGLES BASED ON ANGLES

Name _____

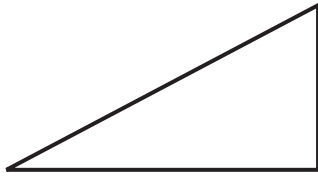
Score _____

Answer key

CT:16

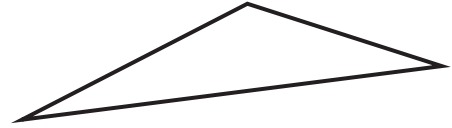
Identify each triangle as acute, right, or obtuse.

1)




Right triangle

2)



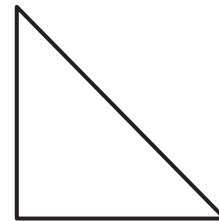
Obtuse triangle

3)



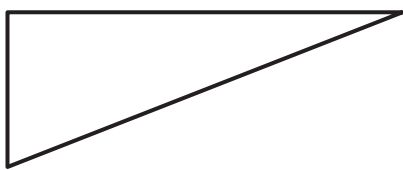
Acute triangle

4)



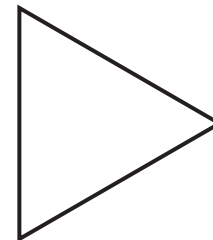
Right triangle

5)



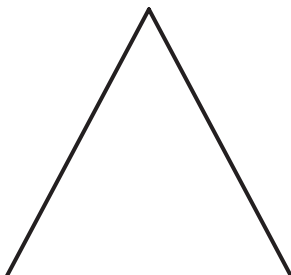
Right triangle

6)



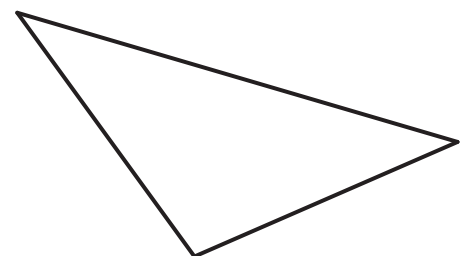
Acute triangle

7)



Acute triangle

8)



Obtuse triangle