



TYPES OF TRIANGLES BASED ON SIDES

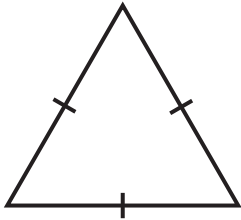
Name _____

Score _____

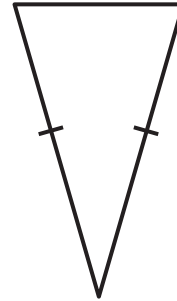
CT:07

Identify the triangles as equilateral, isosceles, or scalene.

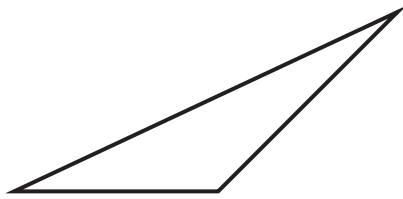
1)



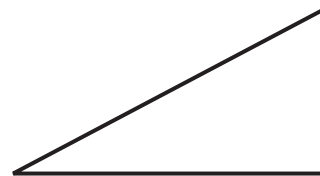
2)



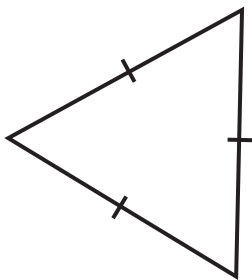
3)



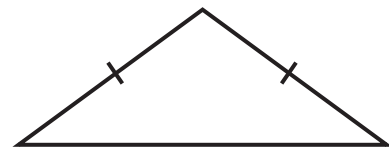
4)



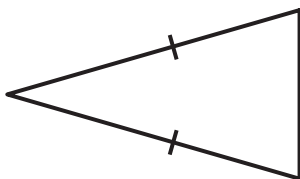
5)



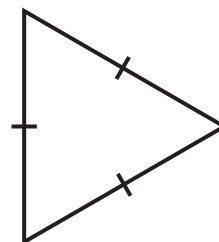
6)



7)



8)





TYPES OF TRIANGLES BASED ON SIDES

Name _____

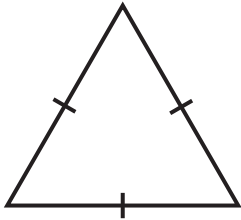
Score _____

Answer key

CT:07

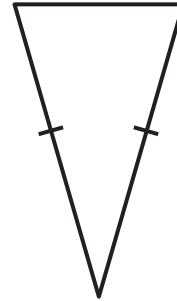
Identify the triangles as equilateral, isosceles, or scalene.

1)



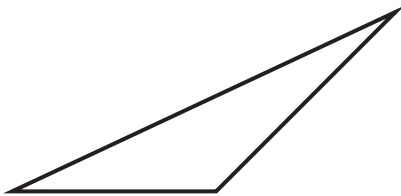
Equilateral triangle

2)



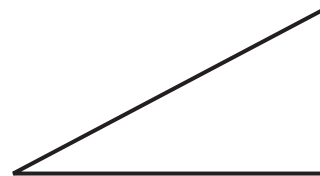
Isosceles triangle

3)



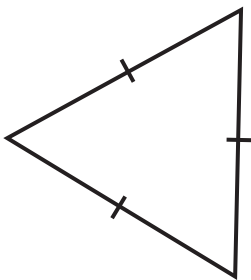
Scalene triangle

4)



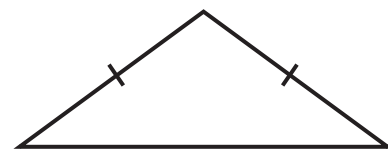
Scalene triangle

5)



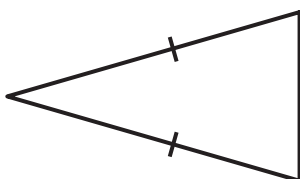
Equilateral triangle

6)



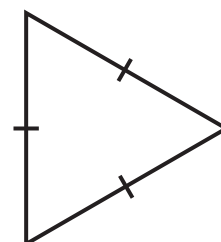
Isosceles triangle

7)



Isosceles triangle

8)



Equilateral triangle