



ORDERING WEIGHT



Name _____

Score _____


MW:03

Use numbers 1-3 to order the objects from the lightest to heaviest.

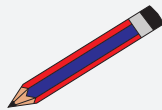
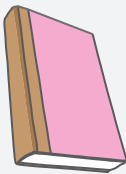
1)



2)



3)



4)





ORDERING WEIGHT

Name _____


Score _____

Answer key

MW:03

Use numbers 1-3 to order the objects from the lightest to heaviest.


1)



1




3



2


2)



2

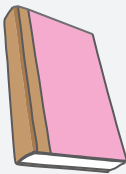


1

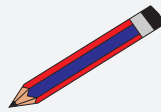


3

3)



3



2



1

4)



1



2



3