



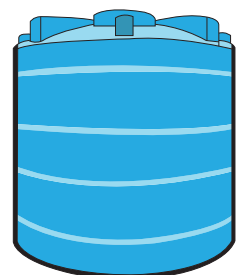
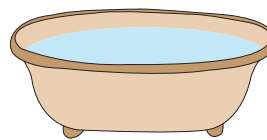
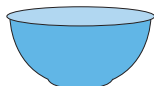
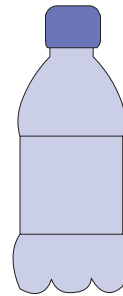
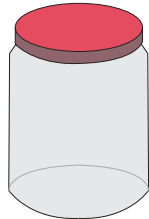

Capacity - More / Less

Name _____

Score _____

MC:01

Circle the object which holds more fluid.





Capacity - More / Less

Name _____

Score _____

Answer key

MC:01

Circle the object which holds more fluid.

