



READING TEMPERATURE

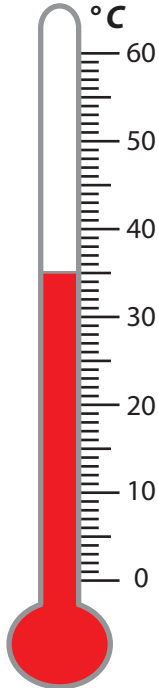
Name _____

Score _____


TM:49

Answer the following.

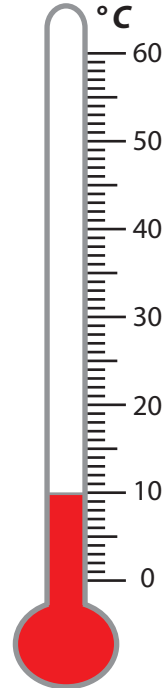
A



B



C



1) If the temperature in thermometer A increases by 5°C , what is the new temperature?

2) Which thermometer reads the least temperature?

3) Compare the temperatures in thermometer A and B.

4) By how many degrees does the temperature fall, if the final reading is 0°C in thermometer C?



READING TEMPERATURE

Name _____

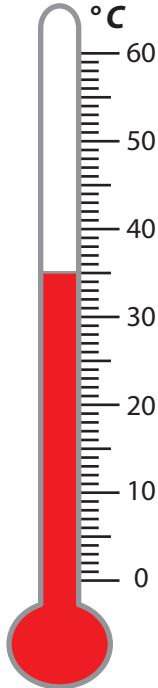
Score _____

Answer key


TM:49

Answer the following.

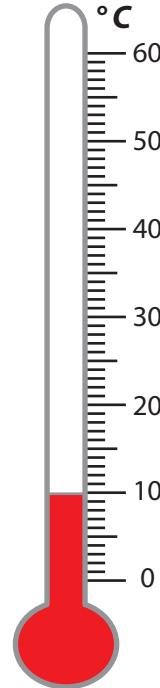
A



B



C



- 1) If the temperature in thermometer A increases by 5 °C, what is the new temperature?

40 °C

- 2) Which thermometer reads the least temperature?

Thermometer C

- 3) Compare the temperatures in thermometer A and B.

A < B

- 4) By how many degrees does the temperature fall, if the final reading is 0 °C in thermometer C?

10 °C