




# COMPARING NUMBERS

Name \_\_\_\_\_

Score \_\_\_\_\_

CN:28



Count the number of objects and fill in the blanks.



How many more flowers than leaves? \_\_\_\_\_

How many flowers? \_\_\_\_\_


Are the number of leaves and flowers equal? \_\_\_\_\_



How many apples? \_\_\_\_\_

How many less mangoes than apples? \_\_\_\_\_

Are the number of mangoes and apples equal? \_\_\_\_\_



How many ladybugs? \_\_\_\_\_

How many more ladybugs than butterflies? \_\_\_\_\_

How many butterflies? \_\_\_\_\_



# COMPARING NUMBERS



Name \_\_\_\_\_

Score \_\_\_\_\_

Answer key

CN:28



Count the number of objects and fill in the blanks.



How many more flowers than leaves? 4

How many flowers? 16


Are the number of leaves and flowers equal? No



How many apples? 10

How many less mangoes than apples? 5

Are the number of mangoes and apples equal? No



How many ladybugs? 11

How many more ladybugs than butterflies? 2

How many butterflies? 9