



ABACUS

Name _____

Score _____

PV:V:27

Count the number of beads shown in each abacus and record them.

Also write the number in words.

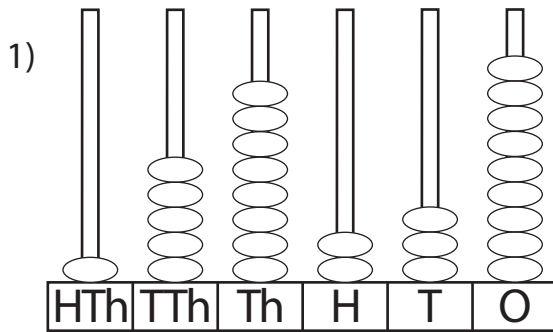


Figure : _____

Words : _____

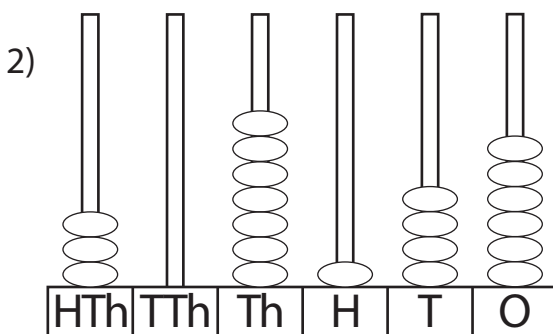


Figure : _____

Words : _____

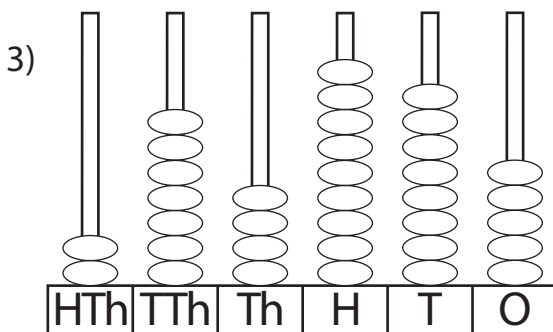


Figure : _____

Words : _____

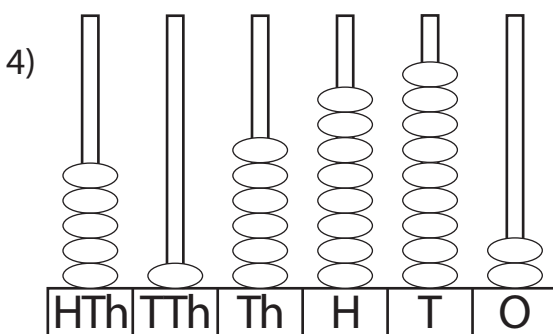


Figure : _____

Words : _____

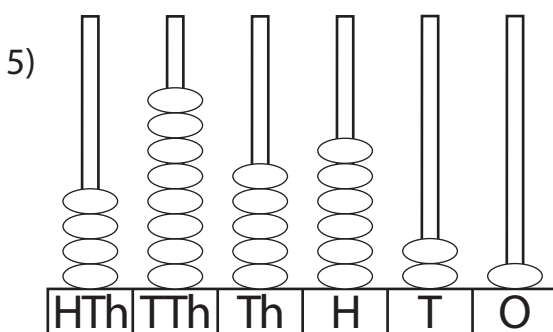


Figure : _____

Words : _____



ABACUS

Answer key

Name _____

Score _____

PV:V:27

Count the number of beads shown in each abacus and record them.

Also write the number in words.

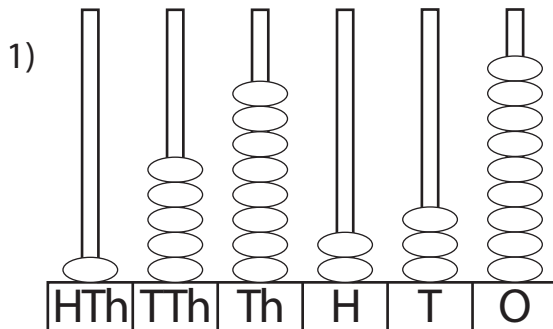


Figure : 158,239

Words : One hundred fifty eight thousand two hundred thirty-nine.

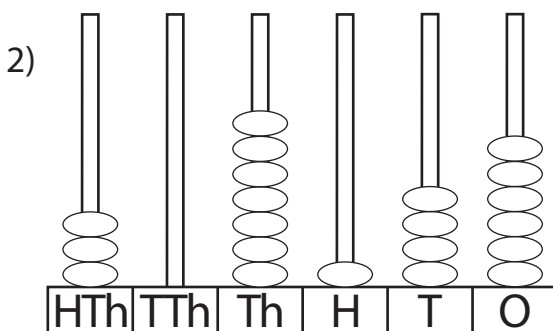


Figure : 307,146

Words : Three hundred seven thousand one hundred forty-six.

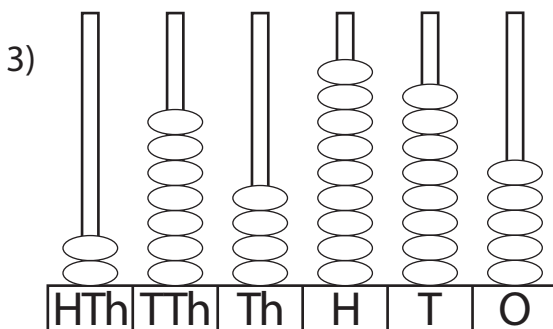


Figure : 274,985

Words : Two hundred seventy four thousand nine hundred eighty-five.

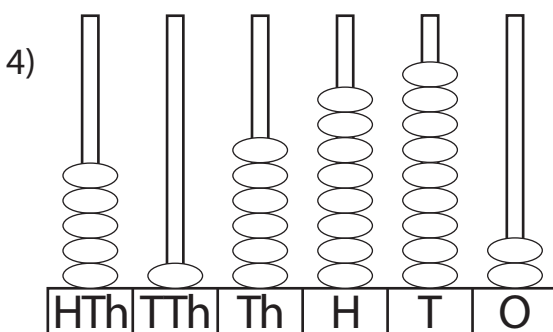


Figure : 516,892

Words : Five hundred sixteen thousand eight hundred ninety-two.

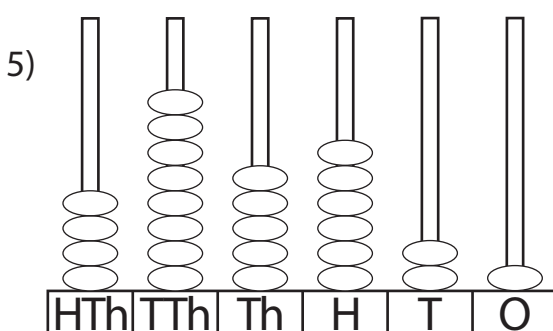


Figure : 485,621

Words : Four hundred eighty five thousand six hundred twenty-one.