



Line, Ray, Line segment, Plane

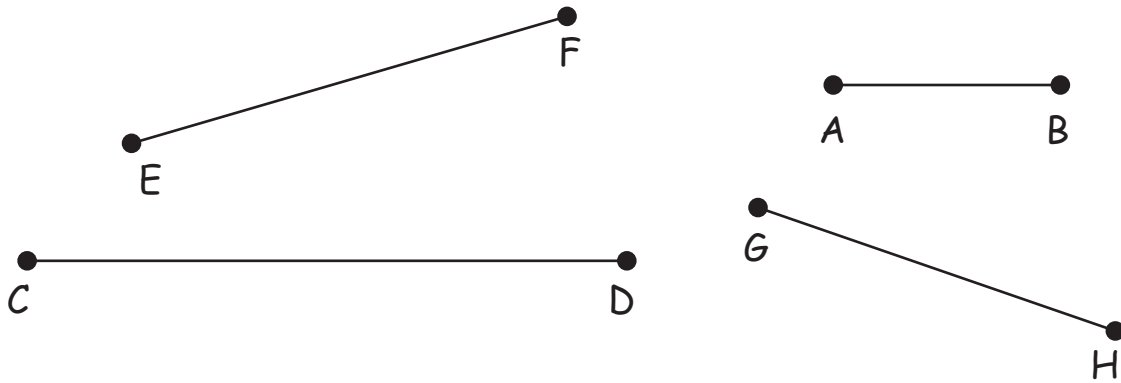
Name _____

Score _____

GSL17

- 1) Draw two lines in a plane such that they do not intersect at any point and are equidistant from each other. What are these lines called as ?

- 2) Measure the lengths of the line segments using a ruler and arrange them in the increasing order.





Line, Ray, Line segment, Plane


Name _____

Score _____

Answer key

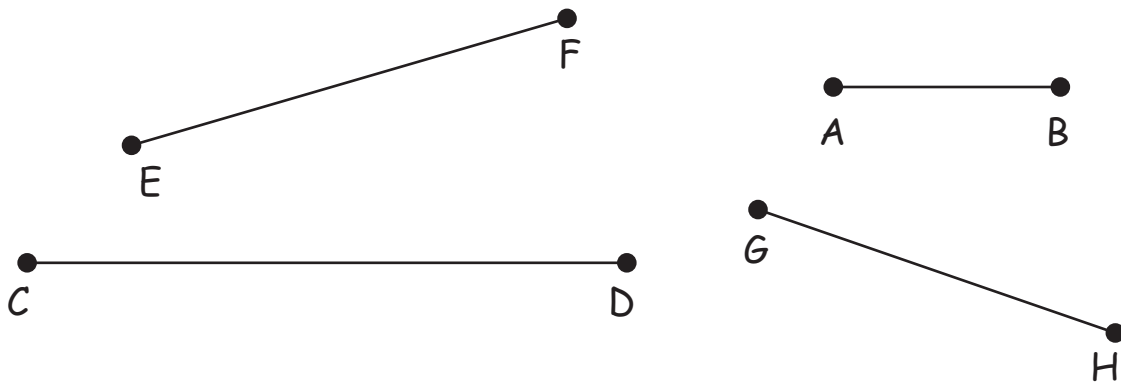
GSL17

- 1) Draw two lines in a plane such that they do not intersect at any point and are equidistant from each other. What are these lines called as ?



Parallel lines

- 2) Measure the lengths of the line segments using a ruler and arrange them in the increasing order.



A 3 cm B

G 5 cm H

E 6 cm F

C 8 cm D