



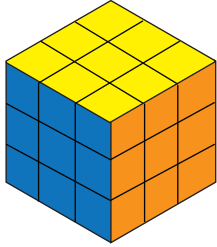
Shapes - Real life objects


Name _____


Score _____


GS:I:19

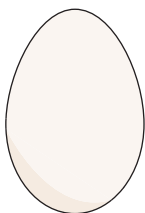
What 2D shapes do the 3D objects represent?













Shapes - Real life objects

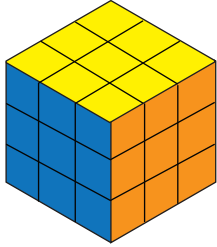
Name _____

Score _____


Answer key

GS:I:19


What 2D shapes do the 3D objects represent?




Square



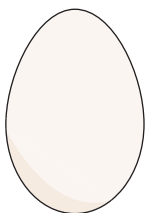
Circle



Triangle



Rectangle



Oval
