




# Identify Shapes

Name \_\_\_\_\_


Score \_\_\_\_\_

GS:I:17

Identify and pick the names of the shapes given below.



\_\_\_\_\_



\_\_\_\_\_




\_\_\_\_\_



\_\_\_\_\_



\_\_\_\_\_



\_\_\_\_\_

*Square*                      *Rectangle*                      *Rhombus*

*Circle*                      *Triangle*

*Heart*                      *Star*



# Identify Shapes


Name \_\_\_\_\_

Score \_\_\_\_\_


## Answer key

GS:I:17

Identify and pick the names of the shapes given below.



Square



Circle




Rectangle



Heart



Star



Rhombus

